



Photograph 2 For use in Question 7



Photograph 1 For use in Question 5



Photograph taken looking towards the SE



Photograph 3 For use in Question 7

Photograph 4 For use in Question 8



MONDAY, 6 JUNE 2022 – AFTERNOON

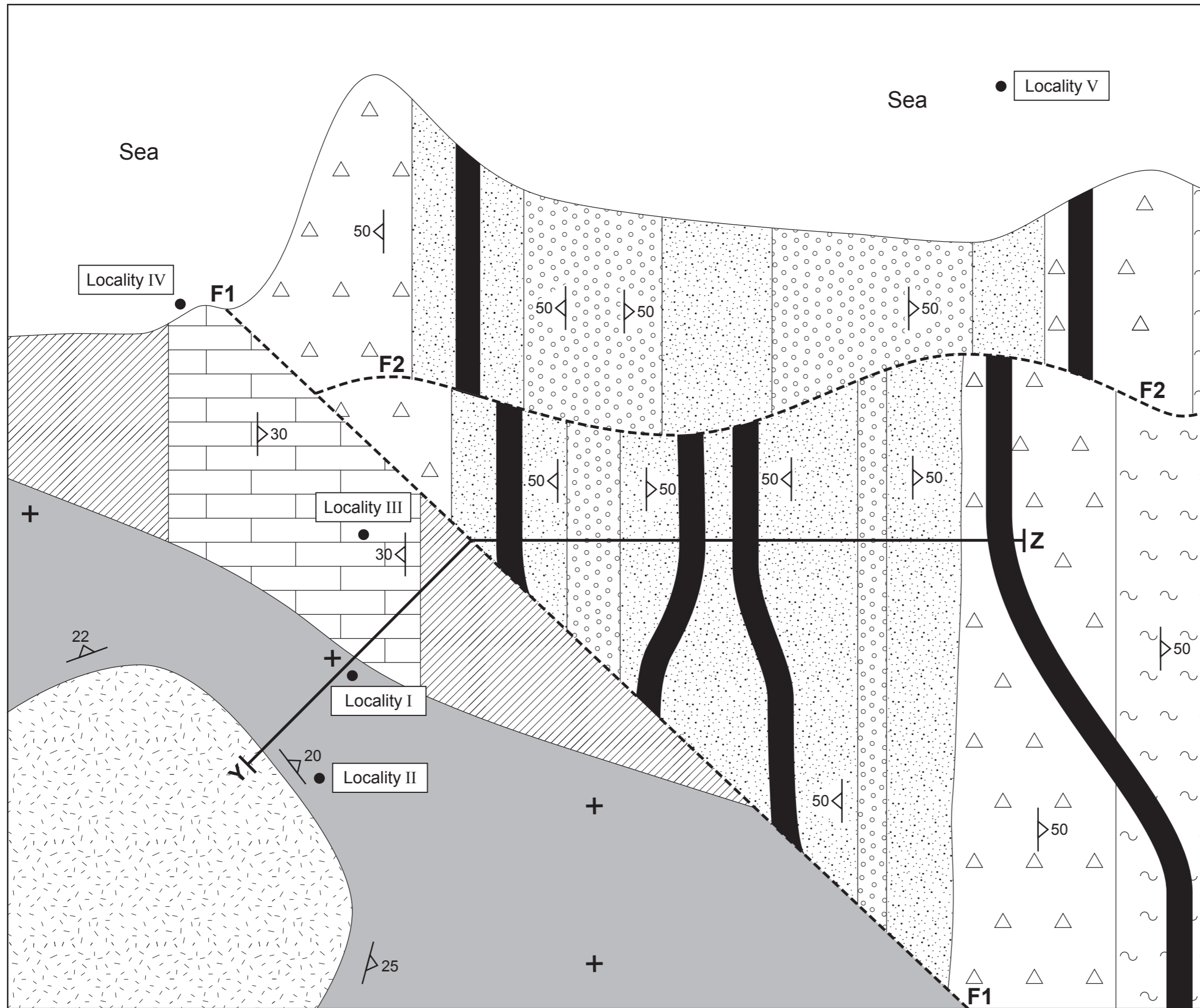
GEOLOGY – A level component 1  
Geological Investigations

RESOURCE SHEET

Acknowledgement:

- Photograph 1 <https://www.flickr.com/photos/usageology/40415862964>
- Photograph 2 [http://www.rrcpc.org.uk/newsletters/NL\\_V41\\_N3\\_A1.htm](http://www.rrcpc.org.uk/newsletters/NL_V41_N3_A1.htm)
- Photograph 3 <https://commons.wikimedia.org/wiki/File:BLW>
- Photograph 4 <https://www.pinterest.com/pin/772437773565370151/>

Map 1



The rock units are not in order of age. Their ornament is not necessarily representative of rock type.

	Rock Unit A
	Rock Unit B (Photograph 4)
	Rock Unit C
	Rock Unit D
	Rock Unit E (Specimen E)
	Rock Unit F (Photograph 1, Specimen X)
	Rock Unit G
	Rock Unit H (Photograph 2, Photograph 3)
	Rock Unit I
	Dip of bedding
	Locality number
	Horizontal Bed
	Fault

