



**GCSE**

**3510U10-1**

**FRIDAY, 20 MAY 2022 – AFTERNOON**

**BUSINESS**

**Unit 1: Business World**

**2 hours plus your additional time allowance**

**Surname** \_\_\_\_\_

**First name(s)** \_\_\_\_\_

**Centre Number** \_\_\_\_\_

**Candidate Number** 0 \_\_\_\_\_

<b>For Examiner's use only</b>		
<b>Question</b>	<b>Maximum Mark</b>	<b>Mark Awarded</b>
<b>1.</b>	<b>2</b>	
<b>2.</b>	<b>2</b>	
<b>3.</b>	<b>4</b>	
<b>4.</b>	<b>8</b>	
<b>5.</b>	<b>4</b>	
<b>6.</b>	<b>20</b>	
<b>7.</b>	<b>20</b>	
<b>8.</b>	<b>20</b>	
<b>9.</b>	<b>20</b>	
<b>Total</b>	<b>100</b>	

**ADDITIONAL MATERIALS**

**A calculator.**

**INSTRUCTIONS TO CANDIDATES**

**Use black ink, black ball-point pen or your usual method.**

**Answer ALL questions.**

**Write your name, centre number and candidate number in the spaces provided on the front cover.**

**Write your answers in the spaces provided in this booklet.**

**If you run out of space, use the additional page(s) at the back of the booklet, taking care to number the question(s) correctly.**

**(Turn over)**

**INFORMATION FOR CANDIDATES**

**The number of marks is given in brackets at the end of each question or part-question. You are advised to divide your time accordingly.**

**The total number of marks available is 100.**

**You are reminded of the need for good English and orderly, clear presentation in your answers.**

**Answer ALL questions.**

- 1. Identify which TWO of the following are responsibilities of a business's finance department. [2 marks]**

**Tick (✓) TWO boxes only.**

<b>Training staff</b>	<b>1</b>	<b>Paying suppliers</b>	<b>2</b>
<b>Preparing contracts of employment</b>	<b>3</b>	<b>Creating a profit and loss account (income statement)</b>	<b>4</b>

**(Turn over)**

2. Identify which TWO of the following are examples of external sources of finance. [2 marks]

Tick (✓) TWO boxes only.

<b>Government grant</b>	<b>1</b>	<b>Retained profit</b>	<b>2</b>
<b>Sales revenue</b>	<b>3</b>	<b>Hire purchase</b>	<b>4</b>

(Turn over)

3. Below are a number of business terms and phrases.

Limited company

Cooperative

Interest rates

Inflation

Product portfolio

Product life cycle

Profit

Satisfaction

Identify which of the terms on page 6 best describes each of the following:

3 (a) The term used to describe the general increase in prices over time. [1 mark]

---

---

(b) The range of all the goods and services offered by a business. [1 mark]

---

---

(c) A business that is owned by its members, usually its workers or customers. [1 mark]

---

---

(d) A non-financial motive for entrepreneurs. [1 mark]

---

---

(Turn over)

**4. Joseph Collins owns a fish and chip restaurant and takeaway in Cardiff. He recorded the number of customers he had each month from April to December.**

**4 (a) Using the table opposite, calculate the average number of customers per month that Joseph had in his fish and chip restaurant and takeaway between April and December. (Show your workings.) [2 mark]**

---

---

---

---

---

---

---

---

---

---

<b>MONTH</b>	<b>NUMBER OF CUSTOMERS</b>
<b>APR</b>	<b>2 513</b>
<b>MAY</b>	<b>3 402</b>
<b>JUN</b>	<b>4 691</b>
<b>JUL</b>	<b>4 643</b>
<b>AUG</b>	<b>5 037</b>
<b>SEP</b>	<b>4 324</b>
<b>OCT</b>	<b>4 918</b>
<b>NOV</b>	<b>8 317</b>
<b>DEC</b>	<b>11 652</b>

One of Joseph's aims is to run an ethical business.

4 (b) Identify TWO ethical business practices a business could use. [2 marks]

1. \_\_\_\_\_

\_\_\_\_\_

2. \_\_\_\_\_

\_\_\_\_\_



5. Opposite is the monthly break-even chart for Noorie's Nail Bar in Aberystwyth. As well as Noorie, there are two other full-time workers. Noorie currently charges £15 for a nail polish and varnish in her nail bar.

(a) (i)

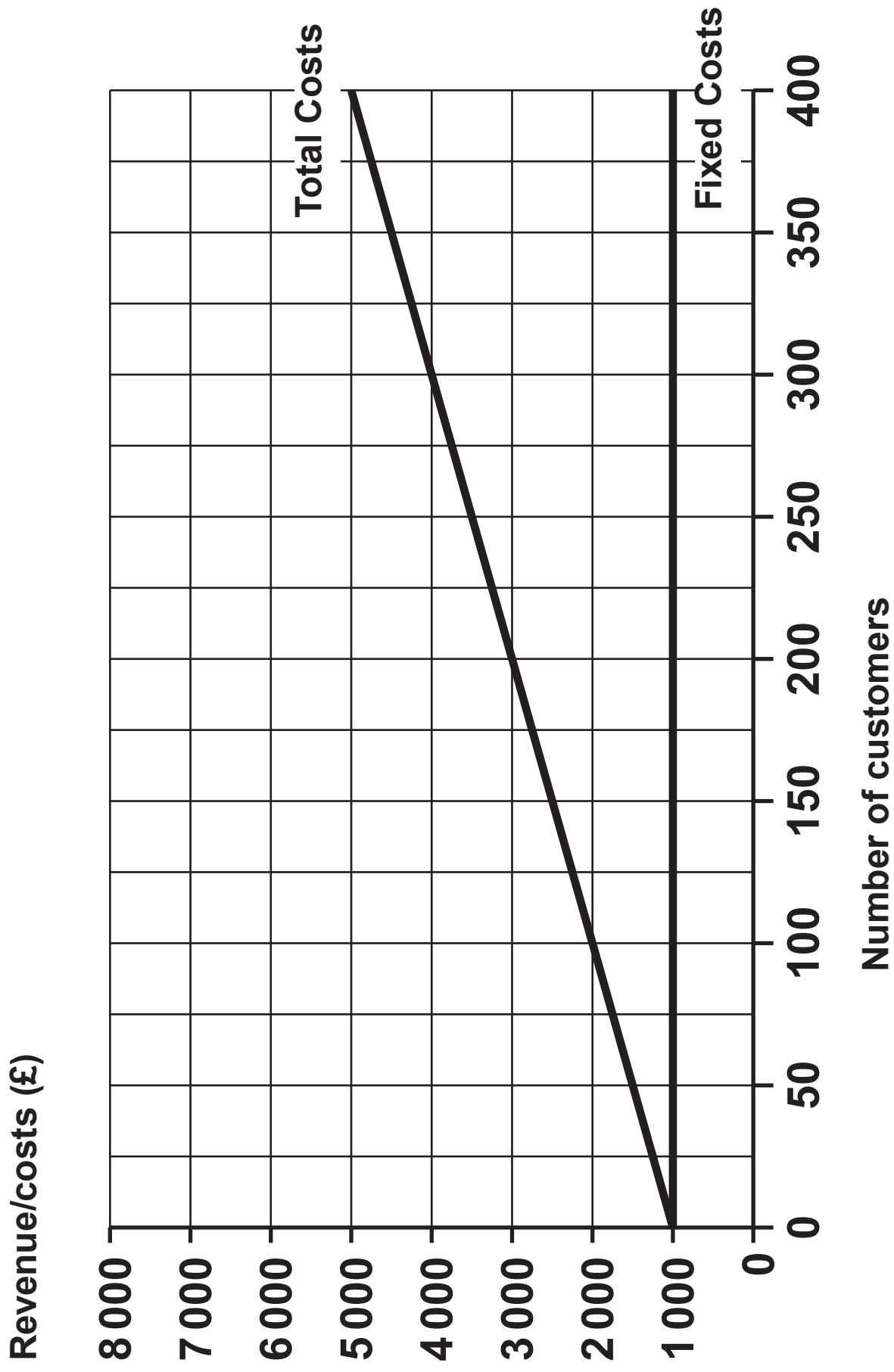
Using the information above and opposite, draw and label the total revenue line on the chart.

[1 mark]

(ii) State the monthly break-even point (number of customers) for Noorie's Nail Bar. [1 mark]

---

---



Noorie is aware of how economic factors can have an impact on her business.

5 (b) Explain how Noorie's business may be affected by an increase in Income Tax rates. [2 marks]

---

---

---

---

---

---

---

---

**6. Play and Learn is a nursery for children aged between 3 months and 7 years old. The nursery is owned and run by Penny Howard, a sole trader. She opened Play and Learn after she was made redundant as a primary school teacher in 2010.**

**Penny continually carries out market research about the childcare industry. The table opposite is one piece of data that Penny found on the internet.**

**(a) Using the table opposite, calculate the percentage increase in 0–4 year olds in the UK between 2006 and 2018. (Show your workings.) [2 marks]**

---

---

---

---

---

---

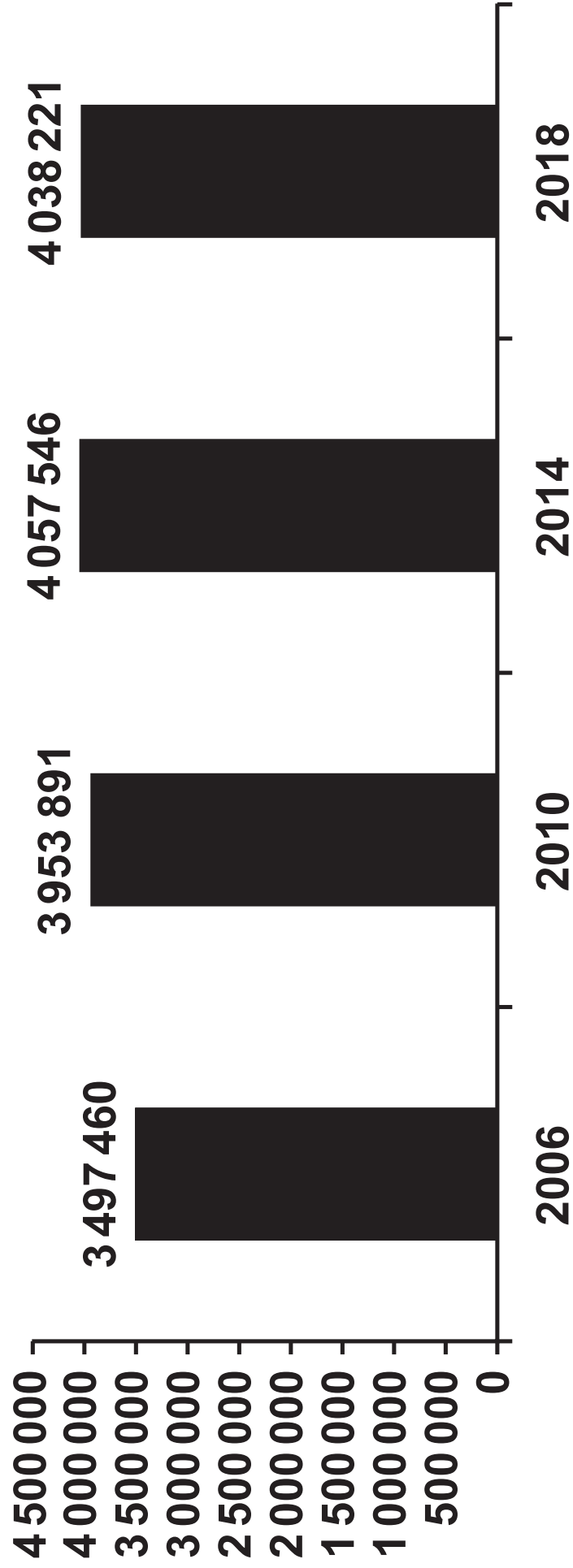
---

---

---

---

The number of 0–4 year olds in the UK from 2006 to 2018



Source: Adapted from populationpyramid.net

(Turn over)



**6 (c) Apart from the internet, suggest ONE other source of secondary (desk) research that a business may use. [1 mark]**

---

---

**(d) Penny also carries out primary (field) research.**

**(i) Name ONE method of primary (field) research.**

**[1 mark]**

---

---

6 (d) (ii)

**Suggest and describe ONE advantage to Penny of carrying out primary (field) research instead of secondary (desk) research. [2 marks]**

---

---

---

---

---

---

---

---

---

---







---

---

---

---

---

---

---

---

---

---

**Additional space for Question 6(f) only:**

---

---

---

---

---

---

---

---

---

---

**7. Designer Sofas UK is an online-only furniture retailer. It does not sell through physical retail stores. Its products are sold to the whole of the UK and some products are exported abroad. The business makes a range of products such as sofas, chairs and tables. Designer Sofas UK has one factory in North Wales where it makes a range of identical standardised furniture products. It also makes individually designed products.**

**(a) (i) Describe which method of production Designer Sofas UK is likely to use in the manufacture of its IDENTICAL STANDARDISED products. [2 marks]**

---

---

---

---

---

---

---

---

---

---

7 (a) (ii)

**Describe which method of production Designer Sofas UK is likely to use in the manufacture of its INDIVIDUALLY DESIGNED products. [2 marks]**

---

---

---

---

---

---

---

---

---

---



---

---

---

---

---











**8. Gymshark Ltd is an online-only fitness clothing and accessories retailer, co-founded by Ben Francis in 2012. Ben had previously created fitness apps for smartphones when he was unable to find gym clothes that he wanted to wear. He started Gymshark Ltd whilst studying business management at university and working part-time as a pizza delivery driver, for extra income. Since quitting both university and his part-time job, the company has gone on to make sales revenues of £43 million in 2017, £100 million in 2018, £176 million in 2019 and £261 million in 2020.**

**(a) Using the information above, describe how Ben Francis displays the characteristics of an entrepreneur. [2 marks]**

---

---

---

---

---

---

---

---

---

---

**(Turn over)**

**8 (b) Gymshark Ltd increased sales revenue by 48% between 2019 and 2020.**

**If sales continue to increase by 48% between 2020 and 2021, calculate Gymshark Ltd's sales revenue for 2021. [1 mark]**

---

---

---

---

---

---

---

**Gymshark Ltd has registered its name and logo to stop other businesses using them.**

**8 (c) Which ONE of the following intellectual property rights is Gymshark Ltd most likely to have used to protect its brand name and logo? [1 mark]**

**Tick (✓) ONE box only.**

<b>Patent</b>	
<b>Copyright</b>	
<b>Trademark</b>	







---

---

---

---

---

---

---

---

**Gymshark Ltd has a unique selling point (USP) of using social media to promote its gym products. The business sponsors “brand ambassadors” who are well-known fitness YouTubers, Instagrammers and bloggers. The brand ambassadors get free clothing from Gymshark Ltd when they demonstrate the products to their followers (on social media) and provide links to the company website. Gymshark Ltd calculates that there are over 20 million followers of its brand ambassadors. Gymshark Ltd believes there are many advantages to using e-commerce and m-commerce in this way.**

**8 (f) Discuss the impact of using social media and blogs on the OWNERS, CUSTOMERS and COMPETITORS of Gymshark Ltd. [8 marks]**

---

---

---

---

---

---

---

---

---

---





**9. Tata, a multinational company with its headquarters in Mumbai, India, has become a global business with operations all around the world. Tata owns over 100 different companies in a range of markets. For example, Tata owns well-known brands like Jaguar Land Rover (makers of Jaguar and Land Rover cars), Tetley Tea (as part of its Global Beverages business) and Tata Steel.**

**(a) State THREE reasons why businesses diversify. [3 marks]**

**1.** \_\_\_\_\_

\_\_\_\_\_

**2.** \_\_\_\_\_

\_\_\_\_\_

**3.** \_\_\_\_\_

\_\_\_\_\_

**As a global business Tata is always looking for the best location for its businesses.**

**9 (b) Suggest and explain TWO factors a business might consider before deciding where to locate.**

**[4 marks]**

1. \_\_\_\_\_

\_\_\_\_\_

\_\_\_\_\_

\_\_\_\_\_

\_\_\_\_\_

\_\_\_\_\_

\_\_\_\_\_

\_\_\_\_\_

\_\_\_\_\_

2.

---

---

---

---

---

---

---

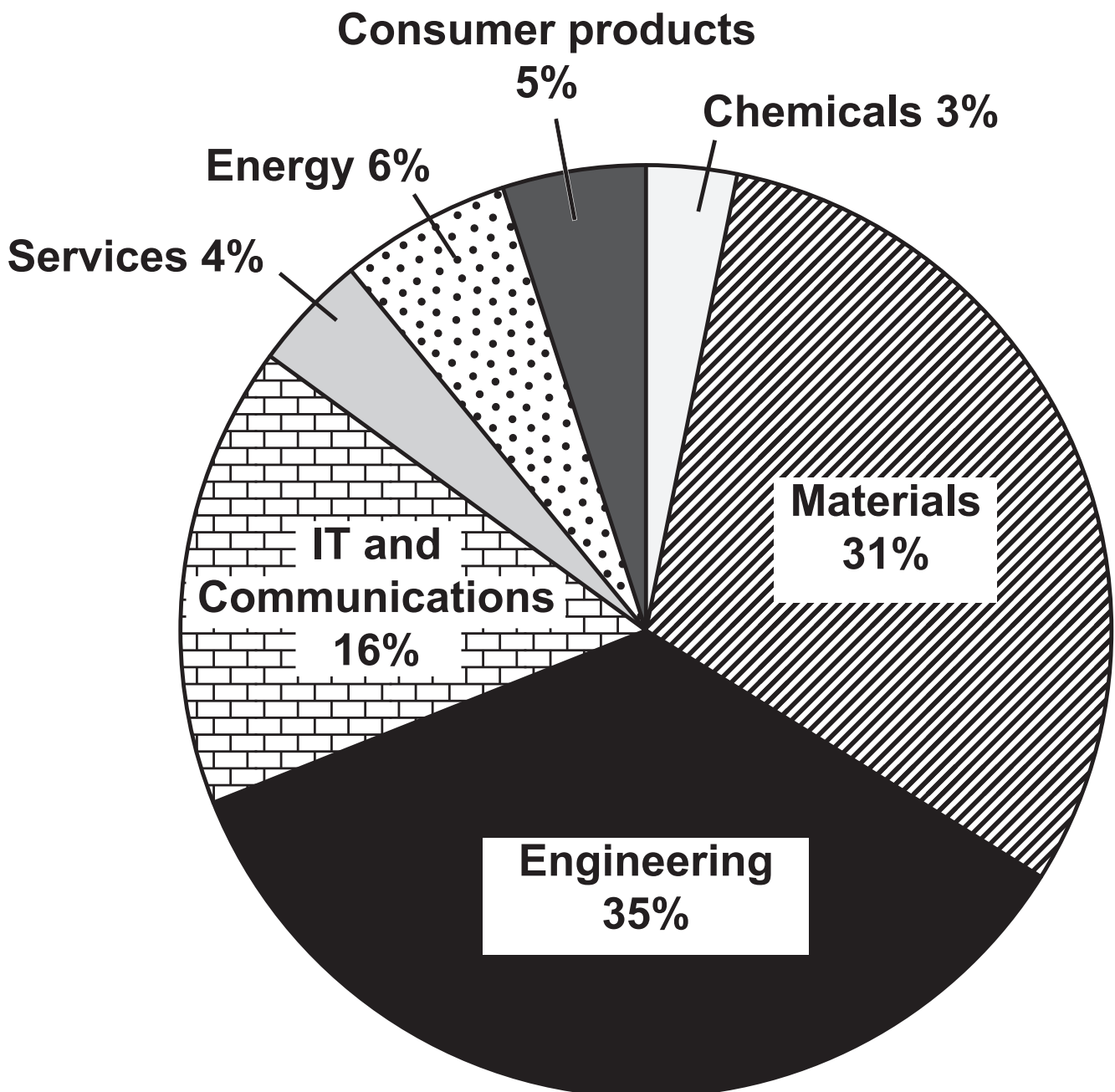
---

---

---

The graph below shows how each different market contributed to Tata's 100.3 billion (\$) revenue in 2018.

**HOW TATA GENERATED ITS \$100.3 BILLION REVENUE FROM ITS DIFFERENT MARKETS IN 2018**



(Turn over)

**9 (c) Calculate the revenue made by Tata’s engineering business in 2018.**

**(Show your answer to 3 decimal places.) [1 mark]**

---

---

---

---

**Tata is committed to reducing its environmental impact by becoming more sustainable.**

**(d) Describe what is meant by the term sustainability. [2 marks]**

---

---

---

---

---

---

---

---

---

---

**(Turn over)**











