



GCE A LEVEL

1410U30-1

CHEMISTRY – A2 unit 3

Physical and Inorganic Chemistry

TUESDAY, 5 JUNE 2018 – AFTERNOON

1 hour 45 minutes plus your additional time allowance

Surname _____

Other Names _____

Centre Number _____

Candidate Number 2 _____

For Examiner's use only		
Question	Maximum Mark	Mark Awarded
Section A 1. to 7.	10	
Section B 8.	14	
9.	18	
10.	12	
11.	18	
12.	8	
Total	80	

ADDITIONAL MATERIALS

In addition to this examination paper, you will need a:

- calculator;
- DATA BOOKLET supplied by WJEC.

INSTRUCTIONS TO CANDIDATES

Use black ink, black ball-point pen or your usual method. Do not use gel pen or correction fluid.

Write your name, centre number and candidate number in the spaces on the front cover.

SECTION A Answer ALL questions in the spaces provided.

SECTION B Answer ALL questions in the spaces provided.

Candidates are advised to allocate their time appropriately between **SECTION A (10 MARKS)** and **SECTION B (70 MARKS)**.

INFORMATION FOR CANDIDATES

The number of marks is given in brackets at the end of each question or part-question.

The maximum mark for this paper is 80.

Your answers must be relevant and must make full use of the information given to be awarded full marks for a question.

The assessment of the quality of extended response (QER) will take place in Q.12(b).

If you run out of space, use the additional page(s) at the back of the booklet, taking care to number the question(s) correctly.

SECTION A

Answer ALL questions in the spaces provided.

- 1. Give the electronic configuration of a copper atom. [1]**

- 2. Excess sodium hydroxide is added to an aqueous solution of chromium(III) chloride, CrCl_3 . Give the formula of the chromium-containing ion formed. [1]**

3(a) Write the equation for the reaction of hot concentrated aqueous sodium hydroxide with chlorine. [1]

(b) This is an example of a disproportionation reaction. State what is meant by the term DISPROPORTIONATION. [1]

4. Give the observation(s) expected when water is added to SiCl_4 . [1]

5. A 25.0 cm³ sample of a solution containing iodine is titrated against a sodium thiosulfate solution of concentration 0.0200 mol dm⁻³. This requires 23.25 cm³ of sodium thiosulfate for complete reaction.



Calculate the concentration of the iodine in the solution in g dm⁻³. [2]

Concentration = _____ g dm⁻³

6. The enthalpy of solution of sodium chloride is $+4 \text{ kJ mol}^{-1}$. Explain why this compound is soluble in water despite this value being positive. [1]

7. When a solution containing the weak base ammonia is neutralised using the strong acid sulfuric acid, a solution of ammonium sulfate is formed. Suggest a pH for this solution, giving a reason for your answer. [2]

10

8(b) Fluorine can form the weak acid hydrofluoric acid, HF. This acid has a K_a value of $7.20 \times 10^{-4} \text{ mol dm}^{-3}$.

(i) Write an expression for the K_a of hydrofluoric acid. [1]

(ii) Calculate the pH of a solution of hydrofluoric acid of concentration $0.100 \text{ mol dm}^{-3}$. [3]

pH = _____

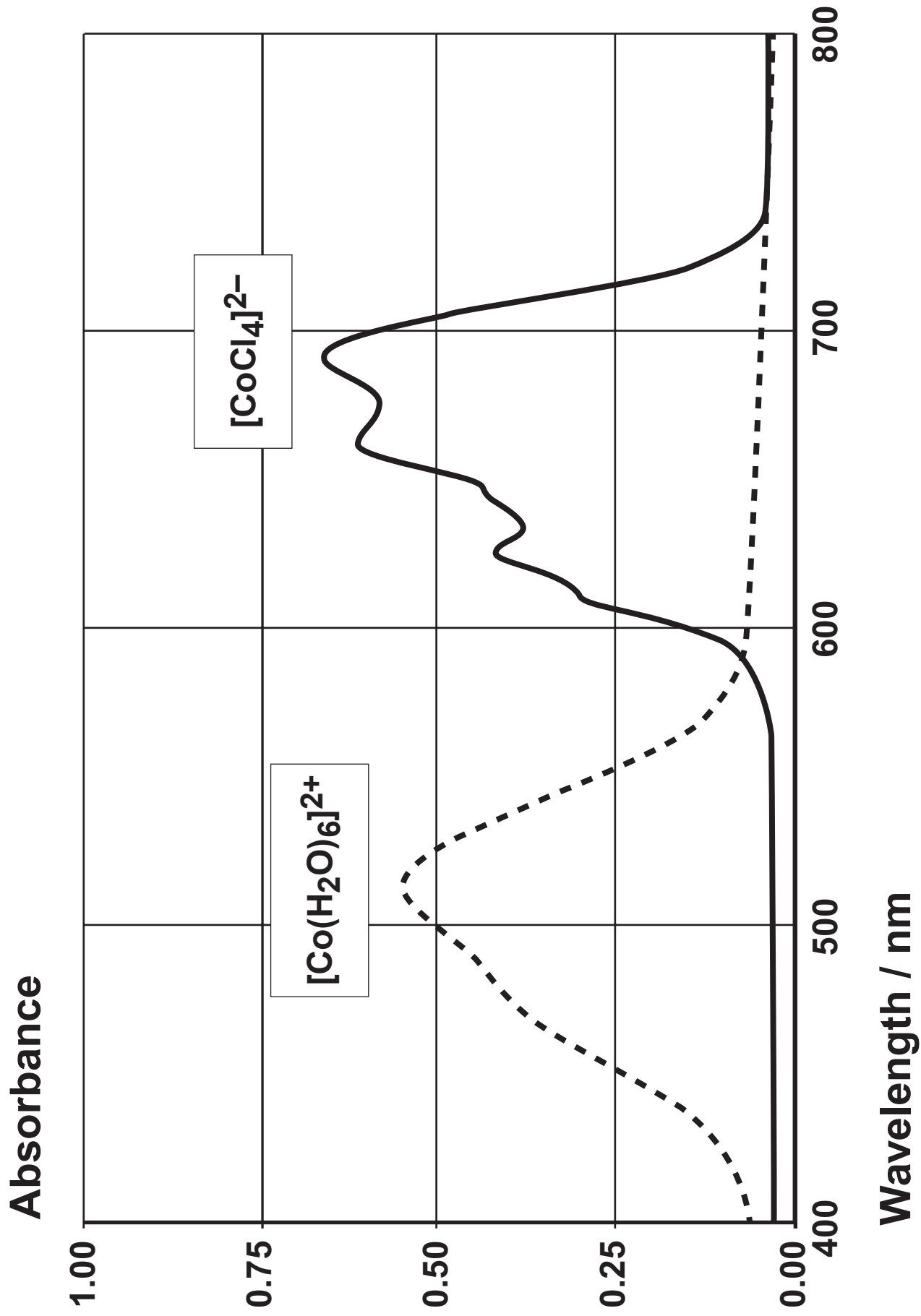
- 8(b) (iv) II. Calculate the pH of this buffer solution. [2]

pH = _____

14

9. Cobalt forms a range of complex ions. Two of these are $[\text{Co}(\text{H}_2\text{O})_6]^{2+}$ and $[\text{CoCl}_4]^{2-}$.
- (a) Draw the structures of the $[\text{Co}(\text{H}_2\text{O})_6]^{2+}$ and $[\text{CoCl}_4]^{2-}$ ions. [2]

9(b) Explain why the $[\text{Co}(\text{H}_2\text{O})_6]^{2+}$ ion is coloured. [3]



9(d) These two cobalt-containing ions absorb different frequencies of light. The spectra opposite show the absorbance at different wavelengths of visible light by the two ions.

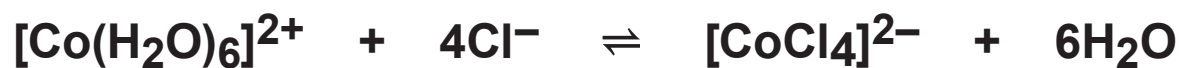
- (i) The maximum absorbance for the $[\text{Co}(\text{H}_2\text{O})_6]^{2+}$ ion occurs at a wavelength of 518 nm. Calculate the energy of this absorbance in kJ mol^{-1} . [3]

Energy = _____ kJ mol^{-1}

9(d) (ii) A colorimeter was used to study the equilibrium between the two ions.

Suggest, giving a reason, an appropriate wavelength to use for the experiment. [1]

- 9(d) (iii) Write the expression for the equilibrium constant, K_C , for this reaction GIVING ITS UNIT. [2]



$$K_C =$$

Unit _____

- 9(d) (iv) A student carries out an experiment starting with separate non-aqueous solutions of $[\text{Co}(\text{H}_2\text{O})_6]^{2+}$ and Cl^- .

When the two solutions are mixed the initial concentrations of both $[\text{Co}(\text{H}_2\text{O})_6]^{2+}$ and Cl^- in the mixture are $0.720 \text{ mol dm}^{-3}$. When the mixture reaches equilibrium the concentration of the water is $0.744 \text{ mol dm}^{-3}$.

Calculate the value of the equilibrium constant, K_{C} . [3]

$$K_{\text{C}} = \underline{\hspace{15cm}}$$

- 10(a) (i) Tin and carbon are both more stable in oxidation state +4 whilst lead is more stable as +2. Explain the difference in the stabilities of these oxidation states. [1]**

- (ii) Lead(IV) oxide can act as an oxidising agent when it reacts with concentrated hydrochloric acid. Write an equation for this reaction. [1]**

[Fe³⁺] / mol dm⁻³	[Sn²⁺] / mol dm⁻³	pH	Initial rate / mol dm⁻³ s⁻¹
0.200	0.100	0	1.4 × 10⁻²
0.300	0.200	0	2.8 × 10⁻²
0.400	0.100	1	1.4 × 10⁻³
0.400	0.200	1	2.8 × 10⁻³

10(b) Tin(II) ions can be used to reduce iron(III) ions in ACIDIC solution.



Use the table opposite to

(i) Find the rate equation for this reaction. [3]

(ii) Calculate the value of the rate constant, k , for this reaction. [2]

$k =$ _____

10(b) (iii) A student suggests that the rate determining step for this reaction is:



State, giving a reason, whether this is a possible rate determining step for this reaction. [2]

10(c) The rate of this reaction can be followed using sampling and quenching.

(i) Explain what is meant by SAMPLING AND QUENCHING. [1]

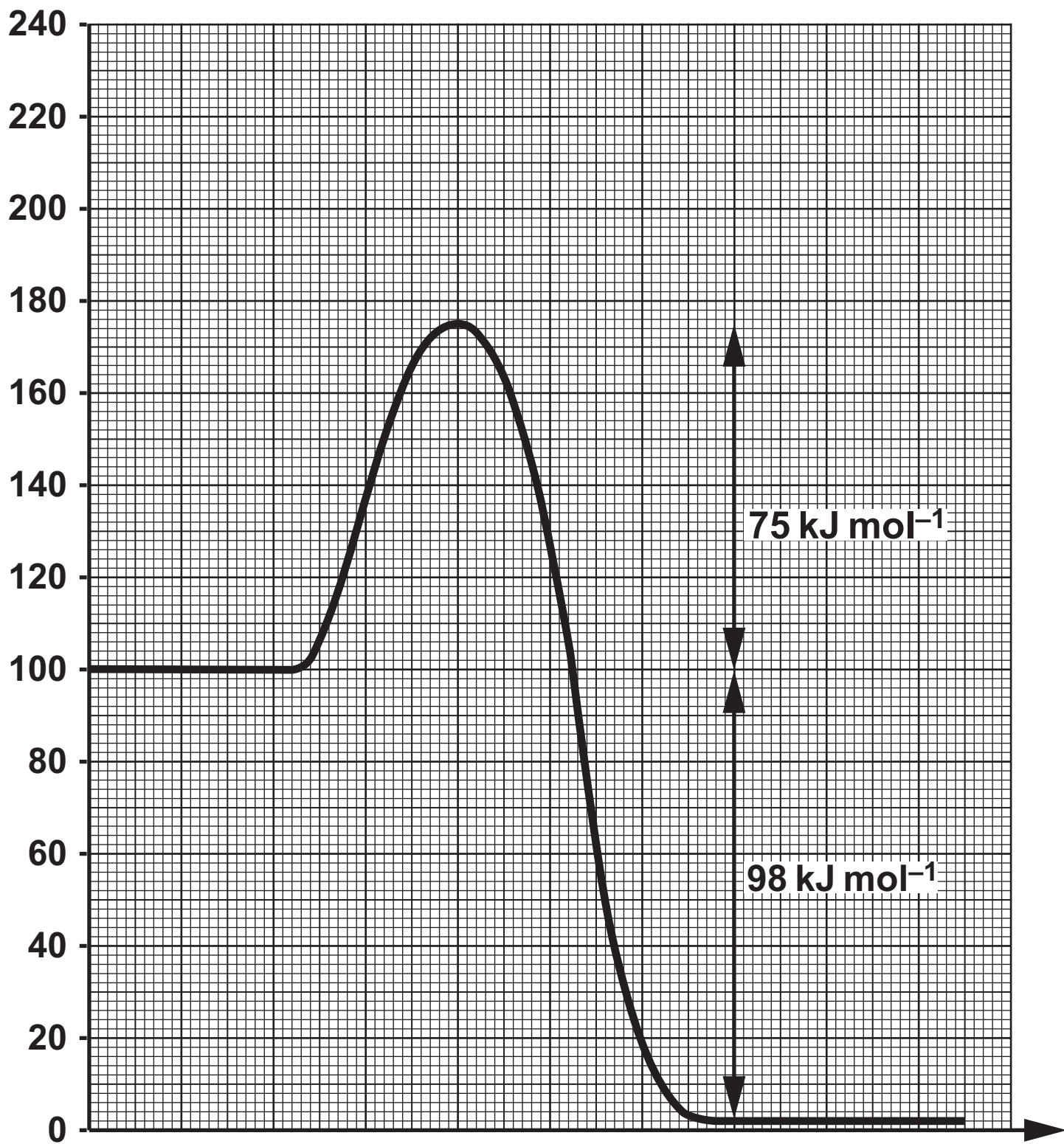
- 10(c) (ii) A 5.00 cm³ sample of the solution was analysed by titration against acidified potassium manganate(VII). The sample required 27.20 cm³ of manganate(VII) solution of concentration 0.00205 mol dm⁻³ for complete reaction.

Calculate the concentration of Fe²⁺ in the solution. [2]



Concentration of Fe²⁺ = _____ mol dm⁻³

Energy / kJ mol⁻¹



Reaction path

11. Hydrogen peroxide, H_2O_2 , decomposes slowly at 300 K to form water and oxygen gas.



The reaction profile for this reaction is shown opposite.

- (a) The rate of decomposition of hydrogen peroxide can be influenced by a range of catalysts. The activation energy when using MnO_2 as a catalyst is 58 kJ mol^{-1} .

Draw the reaction profile for the catalysed reaction ON THE GRID OPPOSITE. [1]

- (b) Another catalyst was used and this gave a value for the rate constant, k , of $1.68 \text{ mol}^{-1} \text{ dm}^3 \text{ s}^{-1}$ and the frequency factor, A , of $1.41 \times 10^4 \text{ mol}^{-1} \text{ dm}^3 \text{ s}^{-1}$ at a temperature of 300 K.

- (i) State the Arrhenius equation. [1]
-
-

- 11(b) (ii) Calculate the activation energy using this catalyst and hence state whether it is a more effective catalyst than MnO_2 . [3]

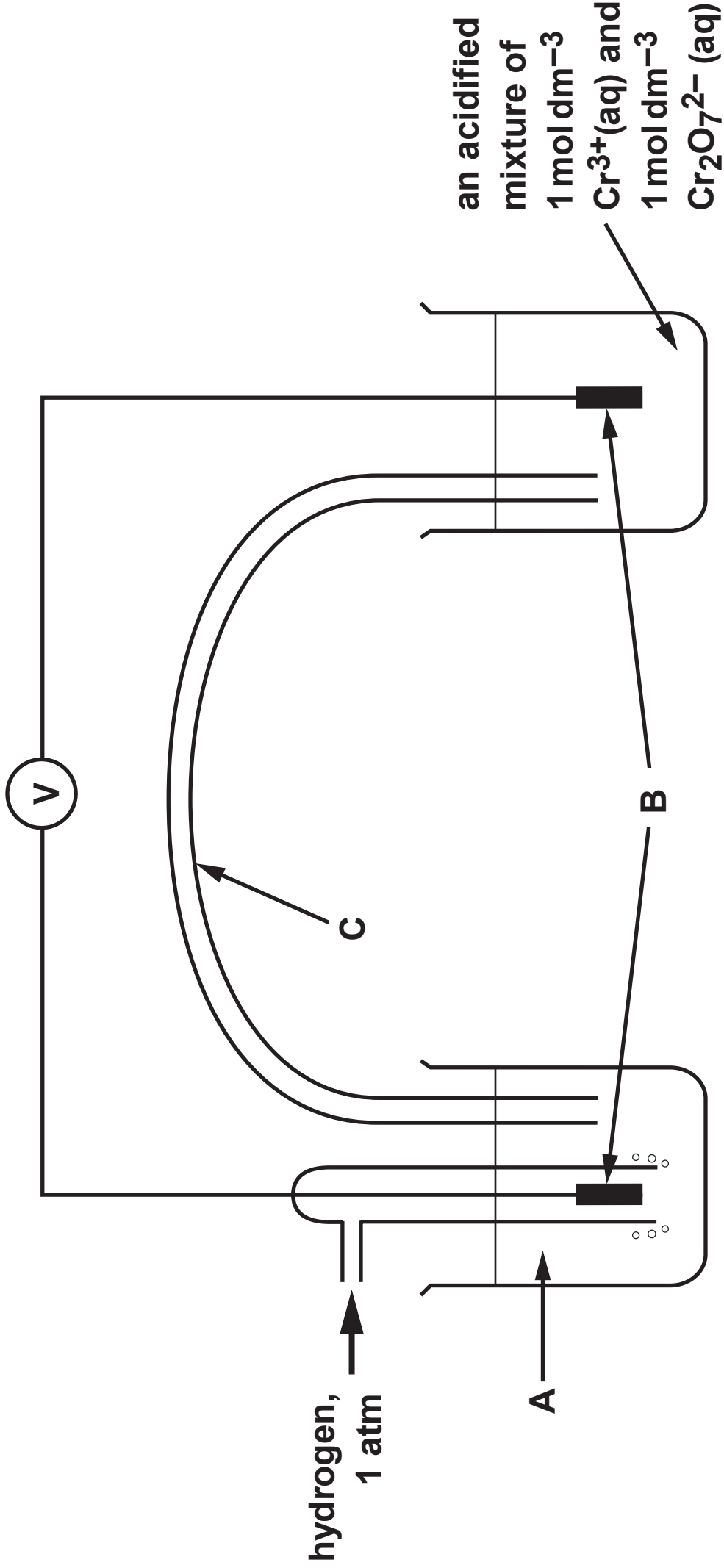
Activation energy = _____ kJ mol^{-1}

- 11(c) The standard enthalpy change of formation, $\Delta_f H^\theta$, of water is -286 kJ mol^{-1} .

Use this information and the graph opposite page 28 to calculate the standard enthalpy change of formation of hydrogen peroxide. [2]

$$\Delta_f H^\theta(\text{H}_2\text{O}_2) = \text{_____} \text{ kJ mol}^{-1}$$

- (d) State whether you would expect the entropy change for the decomposition of hydrogen peroxide to be positive or negative. Give a reason for your answer. [1]



hydrogen,
1 atm

A

B

C

an acidified
mixture of
 1 mol dm^{-3}
 $\text{Cr}^{3+}(\text{aq})$ and
 1 mol dm^{-3}
 $\text{Cr}_2\text{O}_7^{2-}(\text{aq})$

V

11(e) One way of assessing whether a reaction is feasible is to use standard electrode potentials.

	Standard electrode potential / V
$\text{H}_2\text{O}_2 + 2\text{H}^+ + 2\text{e}^- \rightleftharpoons 2\text{H}_2\text{O}$	+1.77
$\text{Cr}_2\text{O}_7^{2-} + 14\text{H}^+ + 6\text{e}^- \rightleftharpoons 2\text{Cr}^{3+} + 7\text{H}_2\text{O}$	+1.33

(i) The apparatus opposite can be used to measure the standard electrode potential for the $\text{Cr}_2\text{O}_7^{2-}/\text{Cr}^{3+}$ half-cell.

I. State what is represented by **A** and **B** on the diagram. [1]

A _____

B _____

II. **ON THE DIAGRAM** show the direction of flow of electrons in the external circuit. [1]

- 11(e) (i) III. State what is represented by **C** on the diagram and state its function.

[1]

- IV. The concentrations of both $\text{Cr}_2\text{O}_7^{2-}$ and Cr^{3+} ions are 1 mol dm^{-3} . State and explain how the value shown on the high resistance voltmeter would change if the concentration of the Cr^{3+} ions were increased whilst the concentration of the $\text{Cr}_2\text{O}_7^{2-}$ was left unchanged. [2]

11(e) (ii) It is suggested that hydrogen peroxide could be used to oxidise Cr^{3+} ions in acidic solution to form dichromate ions.

I. Write an equation for this proposed reaction. [1]

II. Use the standard electrode potential values given to predict whether this reaction is feasible. [2]

- 11(e) (ii) III. Another method of finding whether a reaction is feasible is to use the Gibbs free energy calculated from standard enthalpy of formation and standard entropy values.

State, giving a reason, whether Gibbs free energies or electrochemical methods are more appropriate for finding whether this reaction is feasible. [2]

Solid	Addition of water	Addition of dilute sulfuric acid to solid	Addition of dilute nitric acid to solid
A	dissolves giving colourless solution 1		
B	dissolves giving colourless solution 2		
C	does not dissolve	pale blue solution 3 forms upon warming with the acid	
D	does not dissolve	effervescence and solution 4 forms	
E	does not dissolve	some effervescence but the solid does not dissolve	effervescence and solution 5 forms

	Solution 5	Solution 4	Solution 3	Solution 2
Solution 1 (formed by dissolving solid A)	no visible change	white precipitate	white precipitate	bright yellow precipitate
Solution 2 (formed by dissolving solid B)	no visible change	no visible change	brown solution with a white solid	
Solution 3 (formed by reacting solid C with acid)	thick white precipitate	no visible change		
Solution 4 (formed by reacting solid D with acid)	thick white precipitate			

12. A student was provided with five ionic solids containing familiar cations and anions. Each solid contains a different CATION. The solids were labelled A, B, C, D and E.

The student attempted to dissolve all five solids in water. She then attempted to dissolve those that did not dissolve in water in a stoichiometric amount of acid.

The results are given opposite.

Pairs of the solutions formed were mixed and the observations recorded in the table opposite.

Flame tests

Flame tests carried out on solutions 1, 2, 3, 4 and 5 gave no colour with one solution, an apple-green flame with another and a lilac flame with a third. The student noted unfamiliar flame test colours for the other two solutions.

12(a) Suggest which anion is present in substances **D** and **E**. Give a reason for your answer. [2]

(b) Use **ALL** the information provided to suggest identities for compounds **A-E**.

Explain clearly how you identified compounds **A** and **C**. [6 QER]

A _____

B _____

C _____

D _____

E _____

