



GCE AS/A LEVEL

2400U20-1

FRIDAY, 24 MAY 2019 – MORNING

BIOLOGY – AS unit 2

Biodiversity and Physiology of Body Systems

1 hour 30 minutes plus your additional time allowance

Surname _____

Other Names _____

Centre Number _____

Candidate Number 2 _____

For Examiner's use only

Question	Maximum Mark	Mark Awarded
1.	7	
2.	8	
3.	12	
4.	11	
5.	6	
6.	13	
7.	14	
8.	9	
Total	80	

ADDITIONAL MATERIALS

A calculator and a ruler.

INSTRUCTIONS TO CANDIDATES

Use black ink, black ball-point pen or your usual method.

Write your name, centre number and candidate number in the spaces provided on the front cover.

Answer ALL questions.

Write your answers in the spaces provided in this booklet. If you run out of space, use the additional pages at the back of the booklet, taking care to number the question(s) correctly.

INFORMATION FOR CANDIDATES

The number of marks is given in brackets at the end of each question or part-question.

The assessment of the quality of extended response (QER) will take place in question 8.

The quality of written communication will affect the awarding of marks.

5

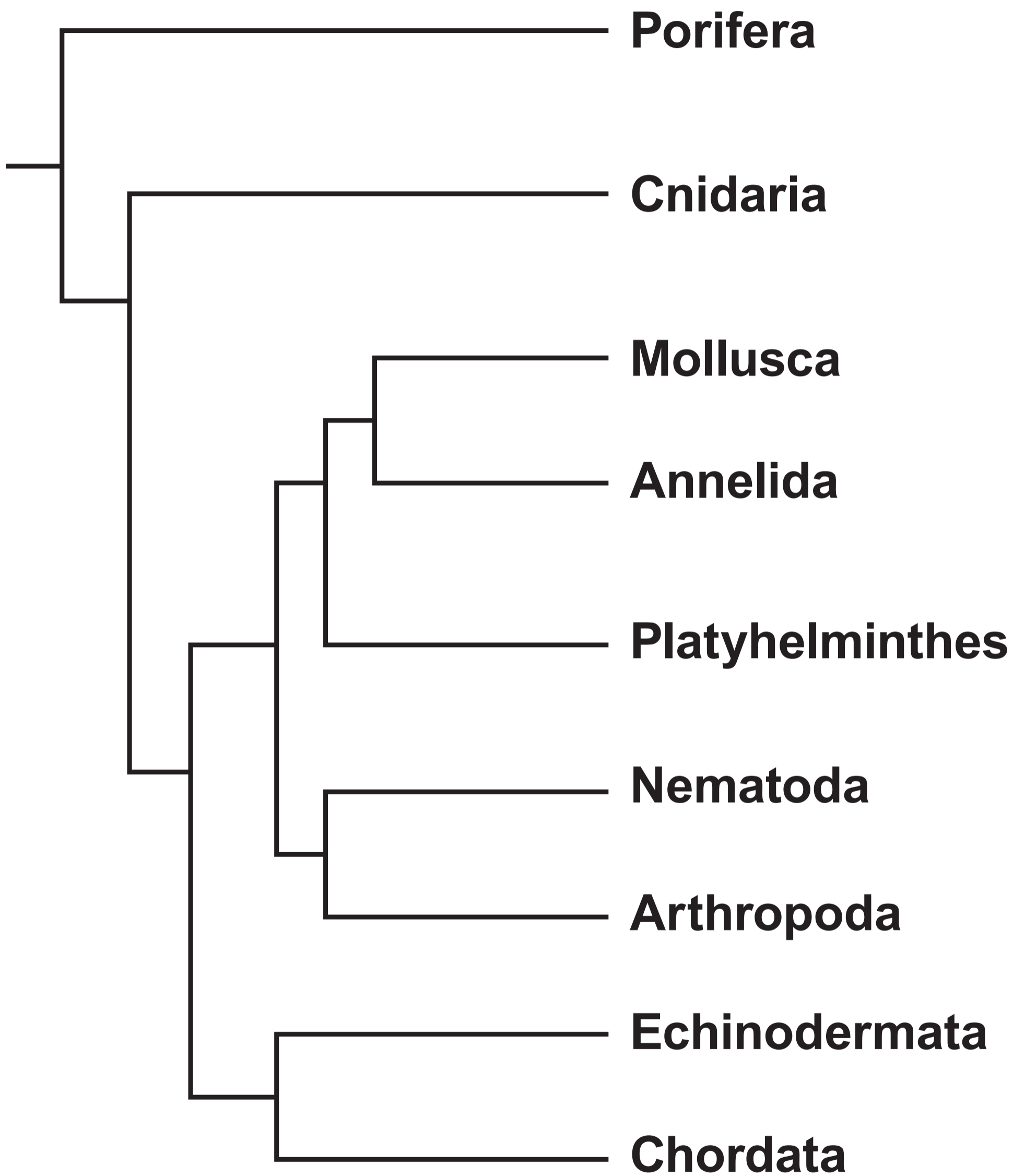
Answer ALL questions.

1(a) All living organisms belong to one of three domains: Eubacteria, Archaea and Eukaryota.

(i) State which of these domains contain organisms with a prokaryotic cell structure. [1]

1(a) (ii) Many members of the domain Archaea are extremophiles. Explain the meaning of the term “extremophile”. [1]

(iii) Members of the kingdom Animalia are classified in the domain Eukaryota. State the other kingdoms that are classified in the domain Eukaryota. [1]



1(b) The phylogenetic tree opposite lists some of the various sub-groups of the kingdom Animalia.

(i) Name the taxonomic group to which these sub-groups belong.

[1]

- 1(b) (ii) The photographs show the eye of an octopus and the eye of a human. Octopuses are molluscs and humans are chordates.**

Octopus



Human



10

7

	Annelid (e.g. earthworm)	Amphibian (e.g. adult frog)	Mammal (e.g. human)
Environmental conditions	Terrestrial (moist)	Terrestrial (moist)	Terrestrial
Gas exchange surface	Skin	Skin, buccal cavity and lungs	Lungs
Permeability of skin to gases	Permeable	Permeable	Impermeable
Mean skin surface area / mm²		5 × 10⁴	1.8 × 10⁶
Mean body volume / mm³	1.2 × 10³	2.5 × 10⁴	6 × 10⁷
Mean surface area to volume ratio	3 : 1	2 : 1	0.03 : 1

- 2. The table opposite provides information about three animals.**
- (a) Calculate the mean skin surface area of the annelid.
GIVE YOUR ANSWER IN STANDARD FORM. [2]**

Surface area = _____ mm²

2(c) The amphibian and the mammal possess mechanisms to ventilate their lungs.

Use the information in the table opposite page 11 and your own knowledge, to explain why the amphibian does not need to ventilate its lungs when inactive, whereas the mammal must ventilate its lungs all the time. [4]



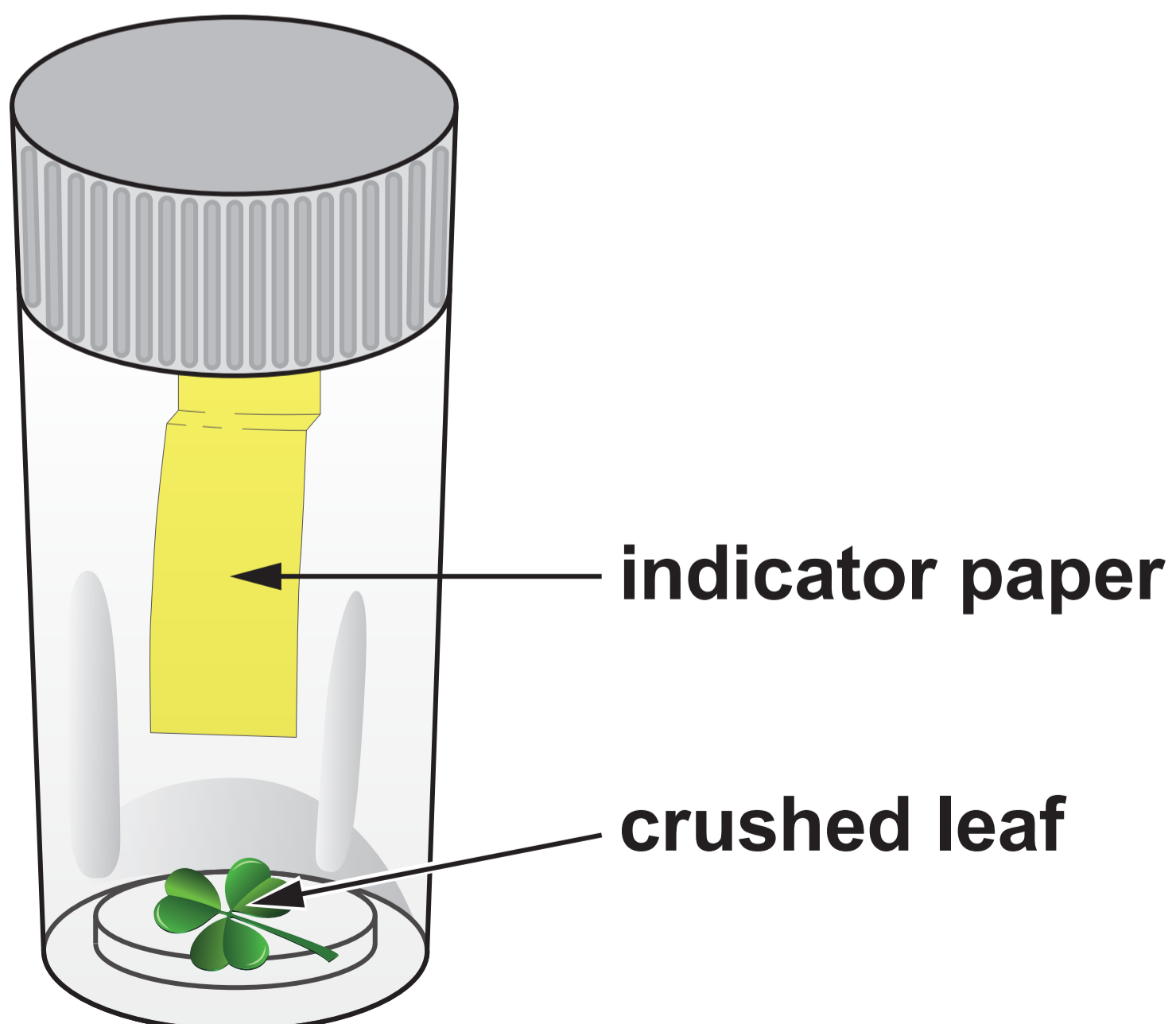
- 3. The photograph opposite shows a single leaf of white clover (*Trifolium repens*). Each leaf has three leaflets.**

Some white clover plants can produce cyanide. Those plants that can produce cyanide are called cyanogenic; those that cannot produce cyanide are called acyanogenic.

The leaves of cyanogenic plants can be damaged by slugs or by ice crystals when exposed to low temperatures. When cell membranes are damaged cyanide is released. Cyanide is toxic to the cells of animals.

3(a) State why it is an adaptation for the clover to produce cyanide. [1]

- 3(b) To test different white clover plants for cyanide production, a single leaf from each plant is crushed in a few drops of water at the bottom of separate 50 mm × 15 mm glass tubes. A short slip of indicator paper is suspended in each tube. Each tube is then incubated for 2 hours at 40 °C. If cyanide is released it will turn the indicator paper from yellow to a reddish brown.**



3(b) (i) Identify TWO controlled variables in this test. [2]

(ii) Explain why the leaves are crushed before inserting the indicator paper. [1]

3(b) (iii) The indicator paper contains a corrosive chemical. Describe a risk in performing this test and the control measure that should be taken to minimise the risk. [1]

Risk _____

Control Measure

3(c) A researcher performed an investigation to discover if there was a correlation between altitude (distance above sea level) and the percentage of cyanogenic clover in a population.

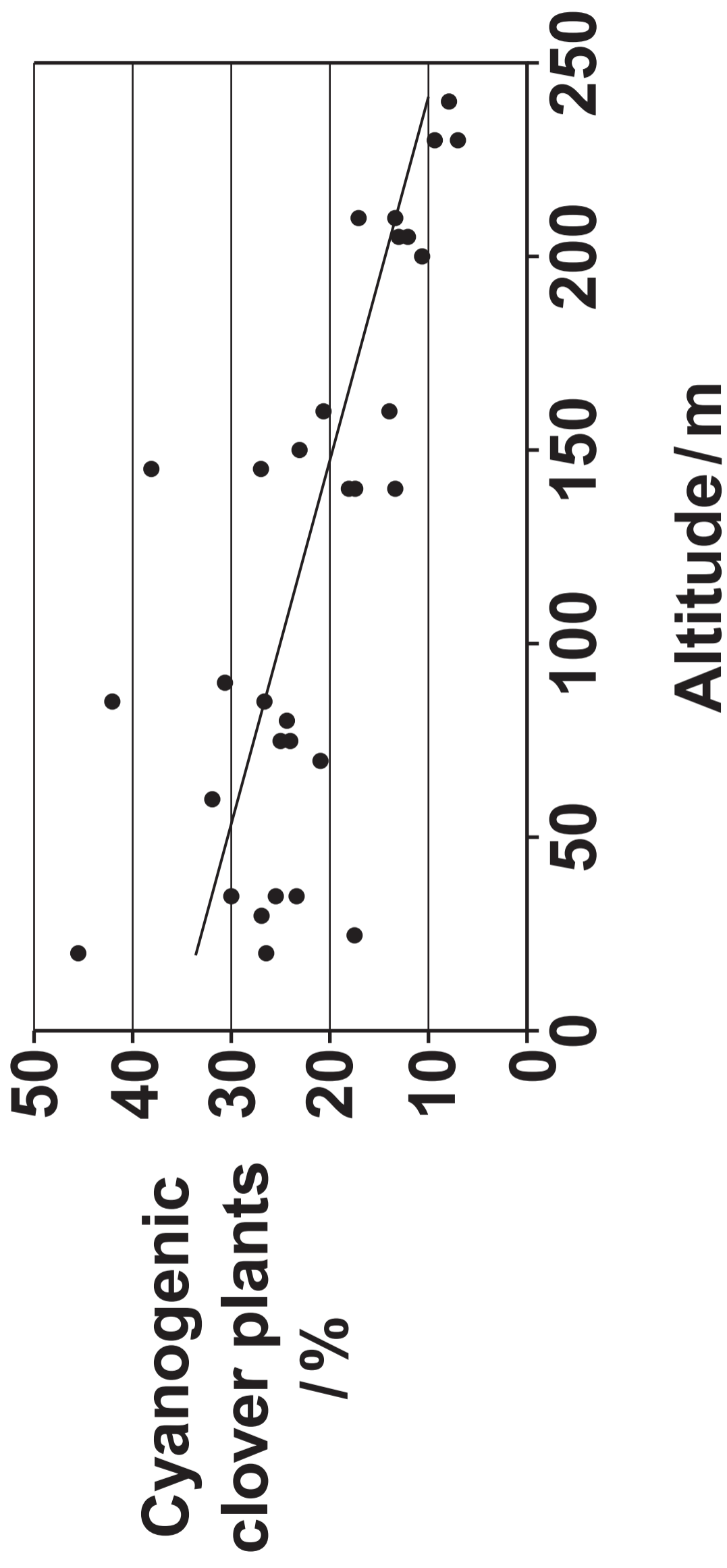
A large number of sites were sampled at altitudes between 20 m and 240 m above sea level. Each site covered an area of 10 m × 10 m. At each site clover leaves were collected at random. Each leaf was then tested for cyanide production.

3(c) (i) Identify the independent and dependent variables in this investigation. [1]

Independent variable:

Dependent variable:

(ii) Describe a method that could be used at each site to collect clover leaves at random. [3]



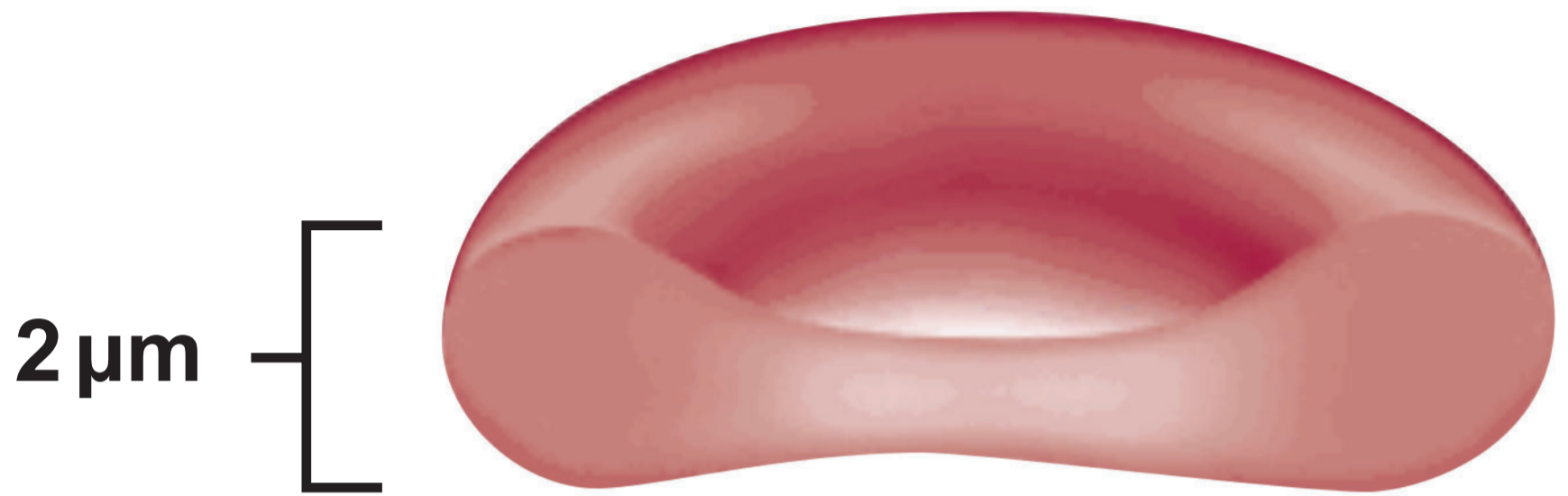
3(d) The scatter diagram opposite summarises the results of this investigation.

The researcher claimed that the reason for the change in the percentage of cyanogenic clover plants was due to differences in ENVIRONMENTAL TEMPERATURE. Was the researcher justified in making this claim? Give a reason for your answer. [1]

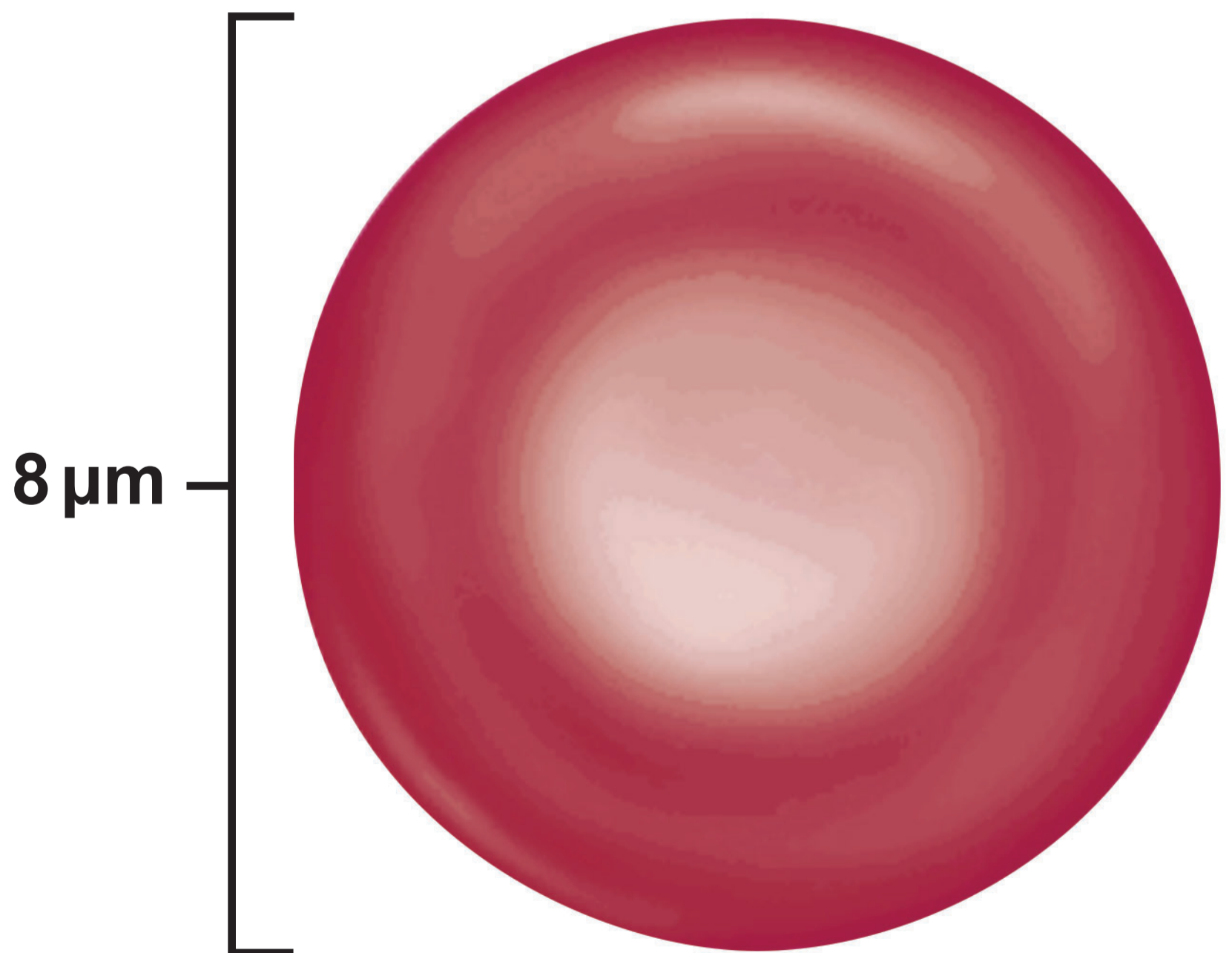
25



Sectional view



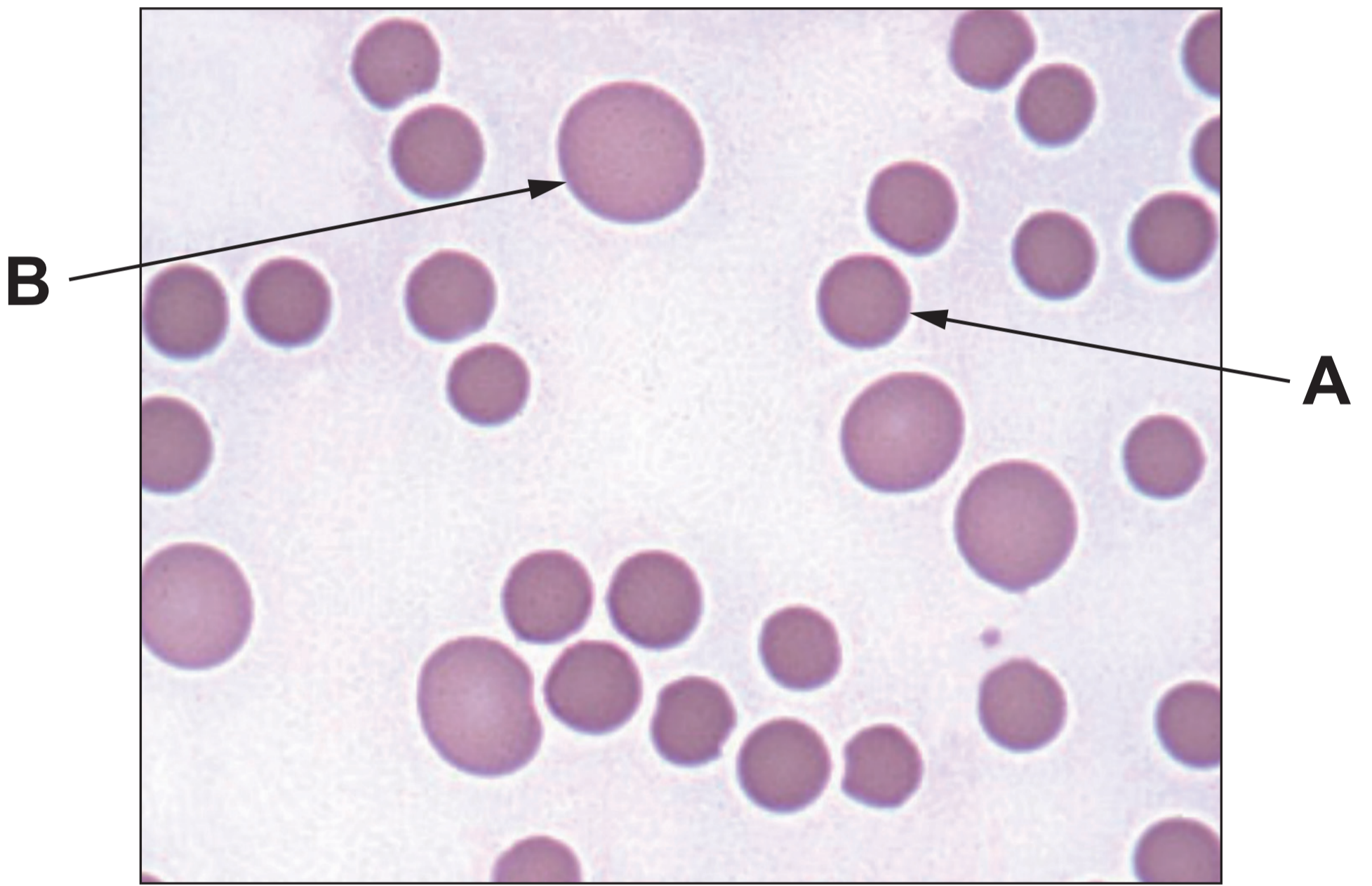
Top view



- 4. The main function of red blood cells (erythrocytes) is to carry oxygen from respiratory surfaces to respiring tissues.**

The diagrams opposite illustrate the structure of a red blood cell.

- (a) Describe and explain how the structure of a red blood cell is related to its function. [3]**



4(b) Anaemia may be defined as a decrease in the oxygen carrying capacity of the blood.

Macrocytic anaemia is caused by a dietary deficiency of vitamin B12 resulting in the production of fewer red blood cells than normal. Some of these red blood cells are very large and are called macrocytes.

The photomicrograph opposite shows red blood cells of an individual with macrocytic anaemia.

4(b) Cell A is a normal red blood cell. It has a diameter of 8 μm . Cell B is a macrocyte. Calculate the diameter of cell B TO THE NEAREST MICROMETRE. [3]

Diameter = _____ μm

$$\text{mean volume of a red blood cell} = \frac{\text{percentage volume of red blood cells in blood}}{\text{red blood cell count (cells per cubic millimetre)}} \times 10^7$$

4(c) A mean red blood cell volume that is higher than normal indicates macrocytic anaemia. The normal range is 80 – 95 μm^3 . The mean volume of a red blood cell in μm^3 can be calculated by using the formula opposite.

- 4(c) (i) Calculate the mean volume of a red blood cell for a person with a red blood cell count of 4.5×10^6 cells per cubic millimetre where the percentage volume of red blood cells is 45%. [2]

Mean volume = _____ μm^3

4(c) (ii) State, with a reason, whether this person has macrocytic anaemia. [1]

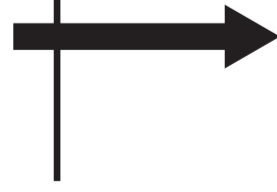
4(c) (iii) Using the given information, suggest TWO reasons why macrocytic anaemia would cause a reduction in the oxygen carrying capacity of blood. Explain your answers. [2]

Arteriolo end

Venulo end

Blood

HP = 5.3 kPa $\psi = -3.3$ kPa HP = 1.6 kPa $\psi = -3.3$ kPa



Tissue fluid

Formation

Reabsorption

- 5. Tissue fluid is formed at the arteriole end of a capillary bed and water is reabsorbed at the venule end.**

The formation of tissue fluid and reabsorption of water occurs as a result of two opposing forces: the hydrostatic pressure of blood and osmotic pressure. Proteins in the plasma maintain a low water potential in the blood.

The diagram opposite illustrates the differences in hydrostatic pressure (HP) and water potential (ψ) between blood and tissue fluid in a capillary bed.

5(a) Use the information in the diagram opposite page 34 to calculate the pressure difference that results in:

(i) tissue fluid formation; [1]

_____ **kPa**

5(a) (ii) water reabsorption. [1]

_____ kPa

**(iii) Name the vessel that removes
excess tissue fluid. [1]**

6



6. The photograph opposite shows the skull of a wild boar (*Sus scrofa*).

(a) Like humans, wild boars are omnivores. From the photograph describe ONE feature of the wild boar's dentition that is typical of a carnivore's dentition and ONE feature that is typical of a herbivore's dentition. For each feature explain how it is suited to the diet of the wild boar.

(i) Carnivore. [1]

6(b) The alimentary canal of a wild boar is very similar to that of a human. STATE THE REGION of the human alimentary canal where the digestion of the following dietary constituents BEGINS: [2]

Lipids _____

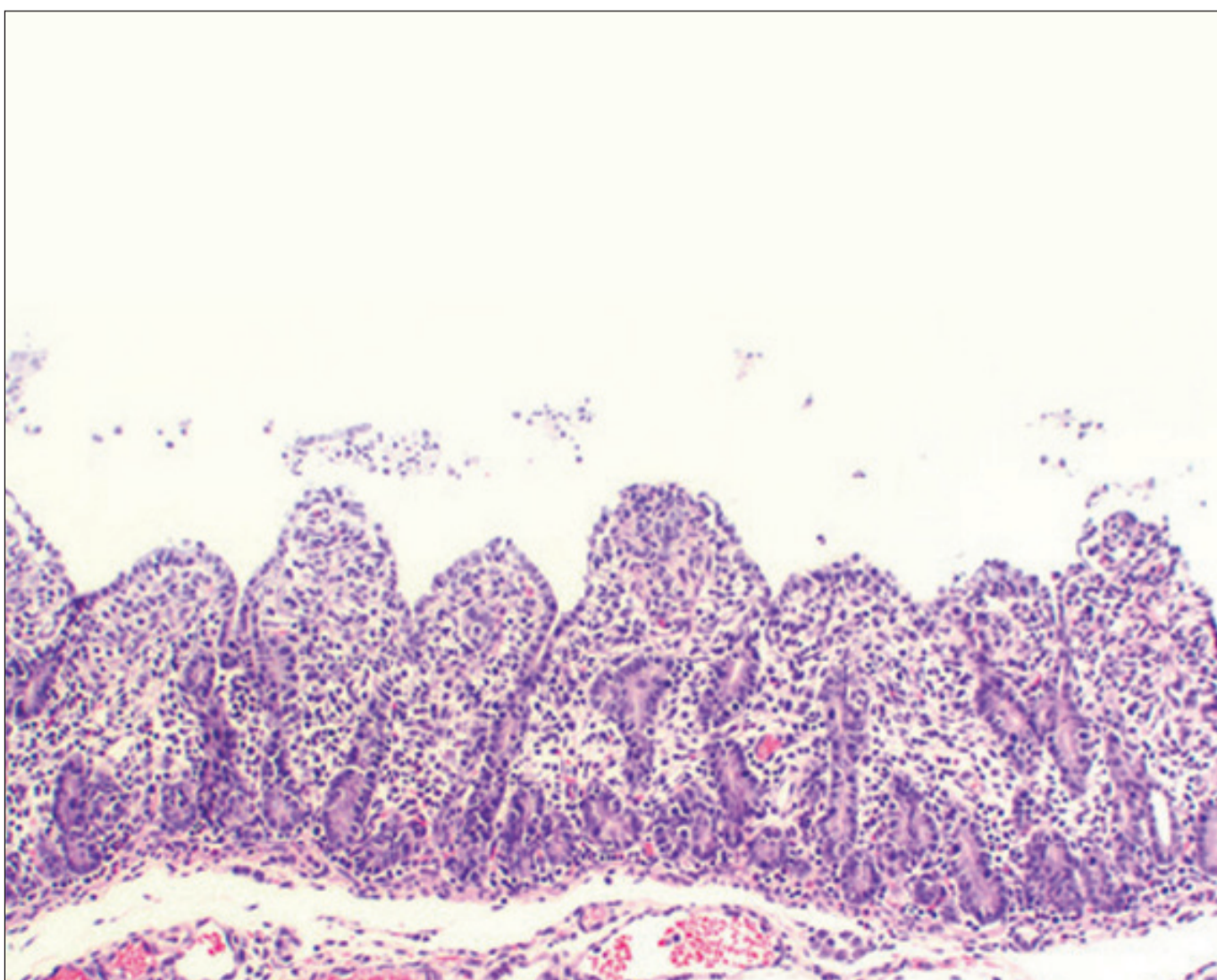
Starch _____

Proteins _____

Normal wild boar



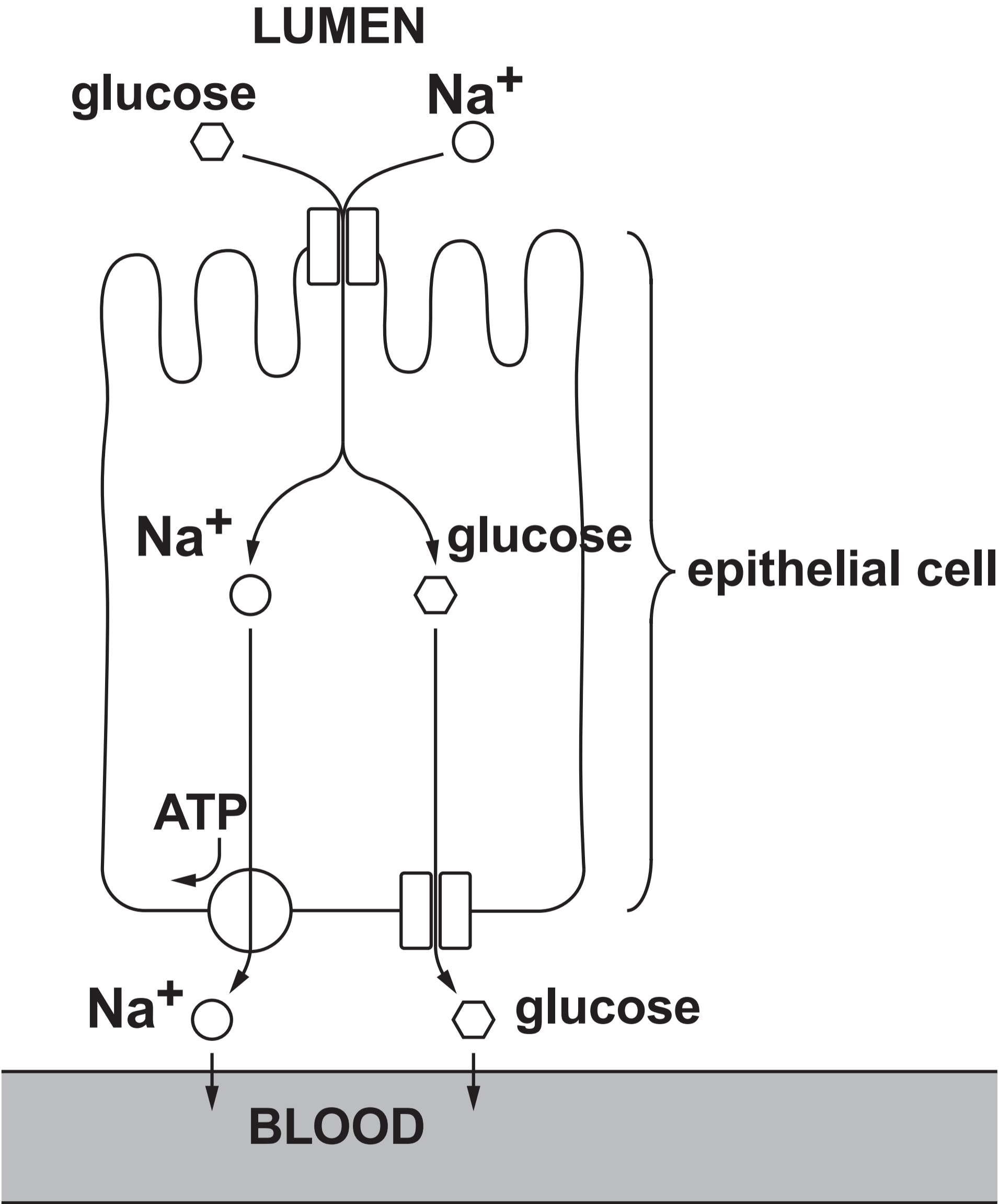
Wild boar with PED



6(c) Porcine epidemic diarrhoea (PED) is a condition that is caused by a virus and leads to severe gastrointestinal disease in wild boars. The virus infects and destroys epithelial cells at the tips of villi in the small intestine. Symptoms include weight loss and diarrhoea.

The photomicrographs opposite show the lining of the small intestine of a normal wild boar and of a wild boar suffering with PED.

With reference to the photomicrographs and your own knowledge, describe and explain how the viral infection causes weight loss and diarrhoea. [5]



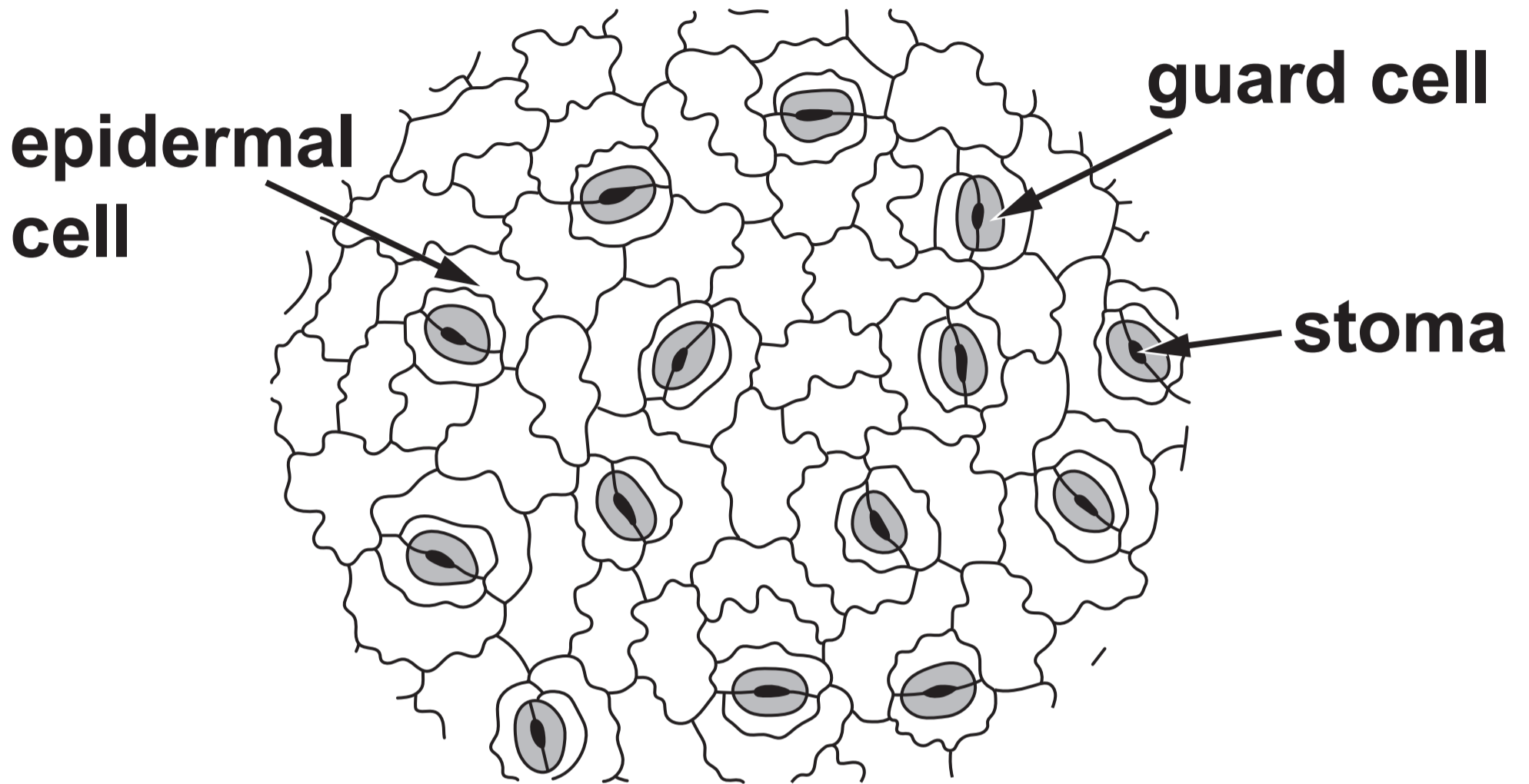
6(d) The epithelial cells of villi contain many mitochondria. These supply ATP for the active transport of sodium ions (Na^+) out of epithelial cells and eventually into blood capillaries.

Use the diagram opposite and your own knowledge to explain how the active transport of sodium ions out of the epithelial cell results in passage of glucose from the lumen of the small intestine, across the epithelium and into the bloodstream.

[4]

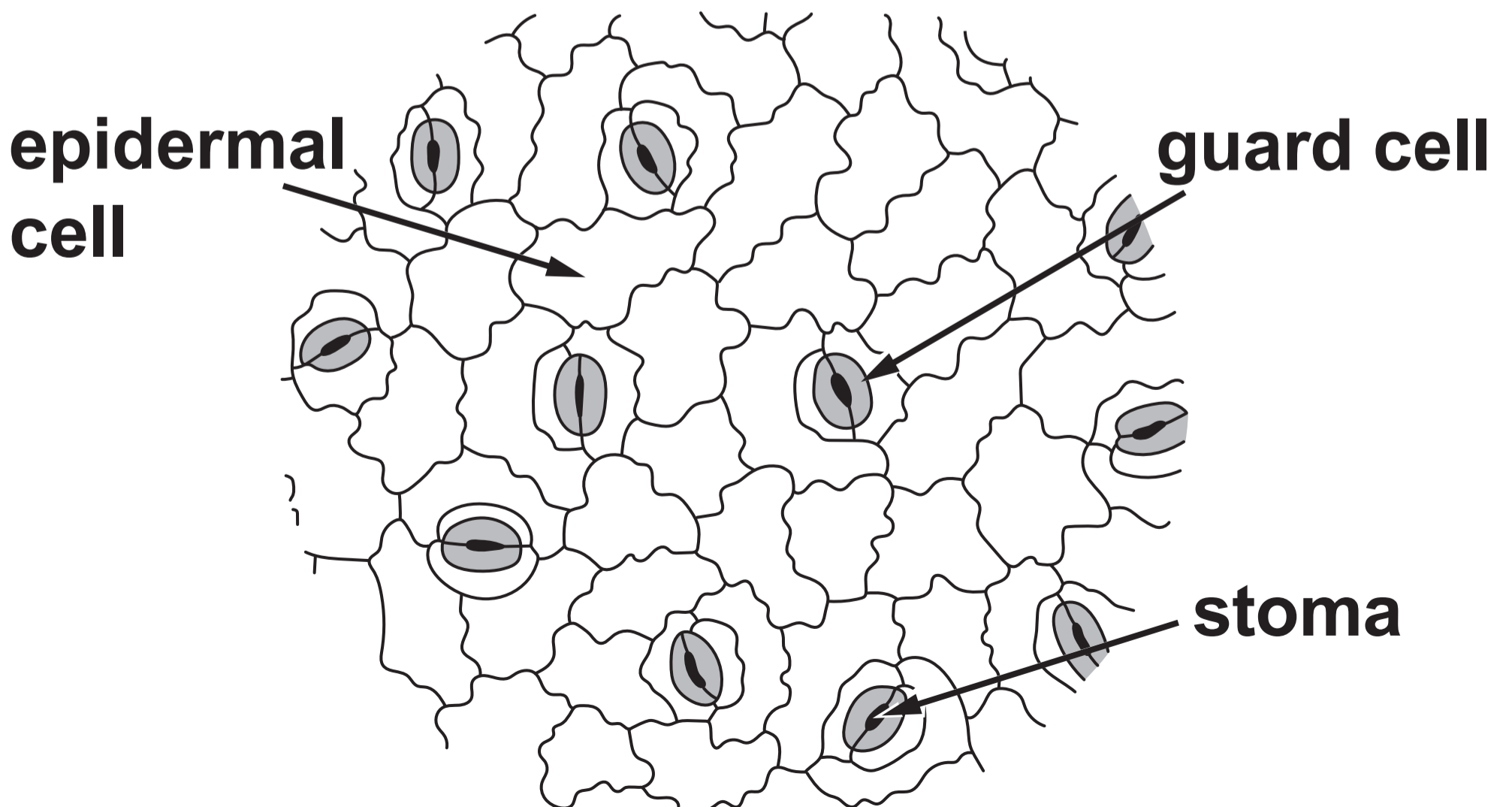
Leaf growing in full sun

DIAGRAM 1



Leaf growing in shade

DIAGRAM 2



7. An investigation was performed to discover the effect of light intensity on the stomatal density of the leaves of coffee plants (*Coffea arabica*). The drawings opposite were obtained using the high power objective of a light microscope. DIAGRAMS 1 and 2 show the number of stomata in the field of view on the lower epidermis for a leaf in full sun and a leaf in shade. Both diagrams are drawn to the same scale.

(a) With the EXCEPTION OF SHAPE, state TWO structural features of guard cells that are different from epidermal cells. [2]

- 7(b) (i) Use the information on page 48 to calculate the number of stomata per mm^2 on the leaf grown in full sun. Show your working in the space provided. GIVE YOUR ANSWER TO THREE SIGNIFICANT FIGURES. [4]**

48

Number of stomata = 14

Diameter of field of view = 0.3 mm

Area of a circle = πr^2

r = radius of a circle

$\pi = 3.14$

Number of stomata =

_____ stomata per mm²

- 7(b) (ii) The stomatal index is the ratio of the number of stomata to the total number of epidermal cells. It is calculated using the following equation.**

$$\mathbf{SI = \frac{S}{S + E} \times 100}$$

SI = stomatal index.

S = number of stomata per unit area.

E = number of epidermal cells in the same unit area.

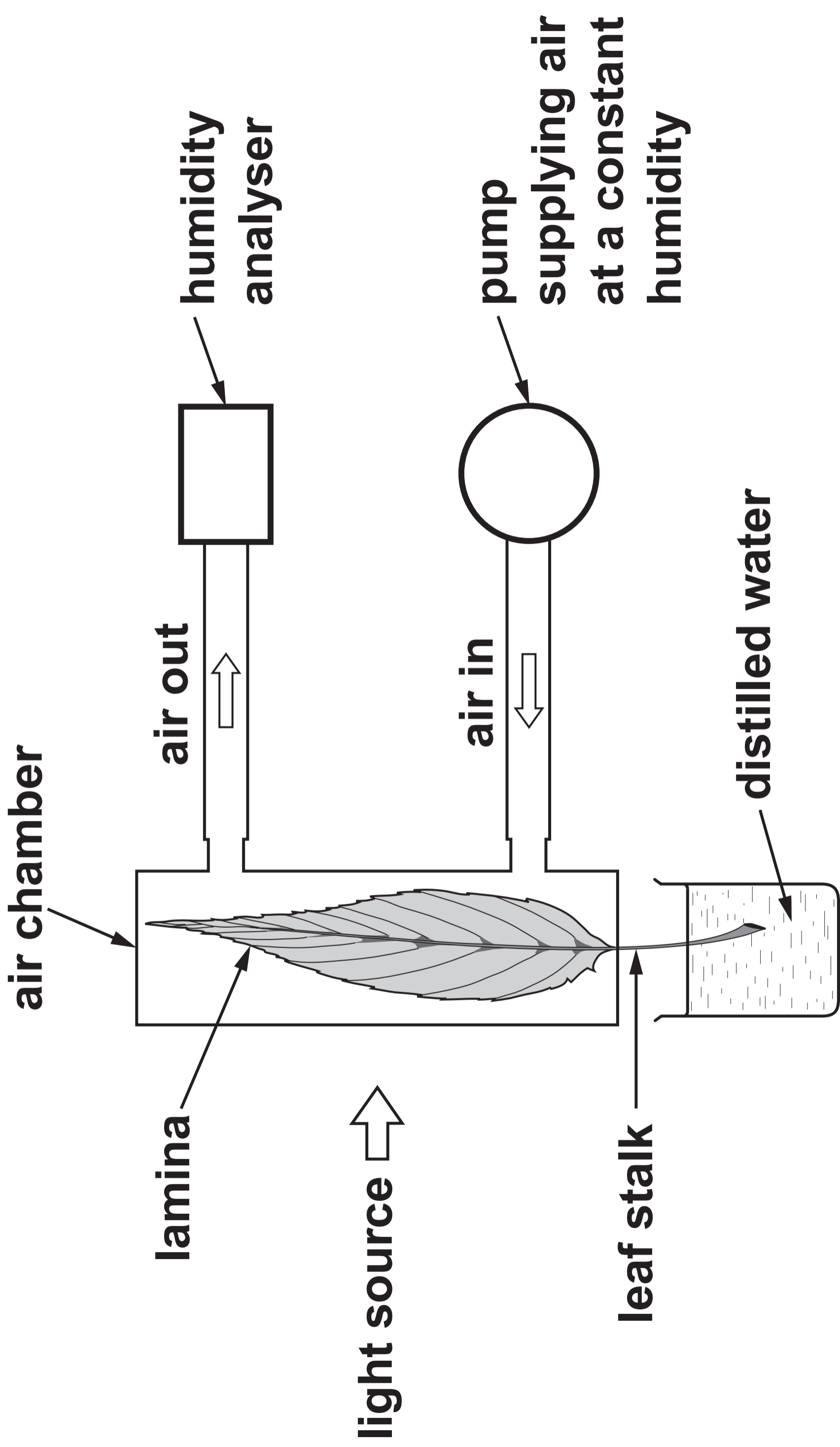
- 7(b) (ii) **TABLE 1** gives the stomatal indices for the leaf grown in full sun and the leaf grown in shade.

TABLE 1

	Leaf grown in full sun	Leaf grown in shade
S	14	11
S + E	77	61
SI	18.2	18.0



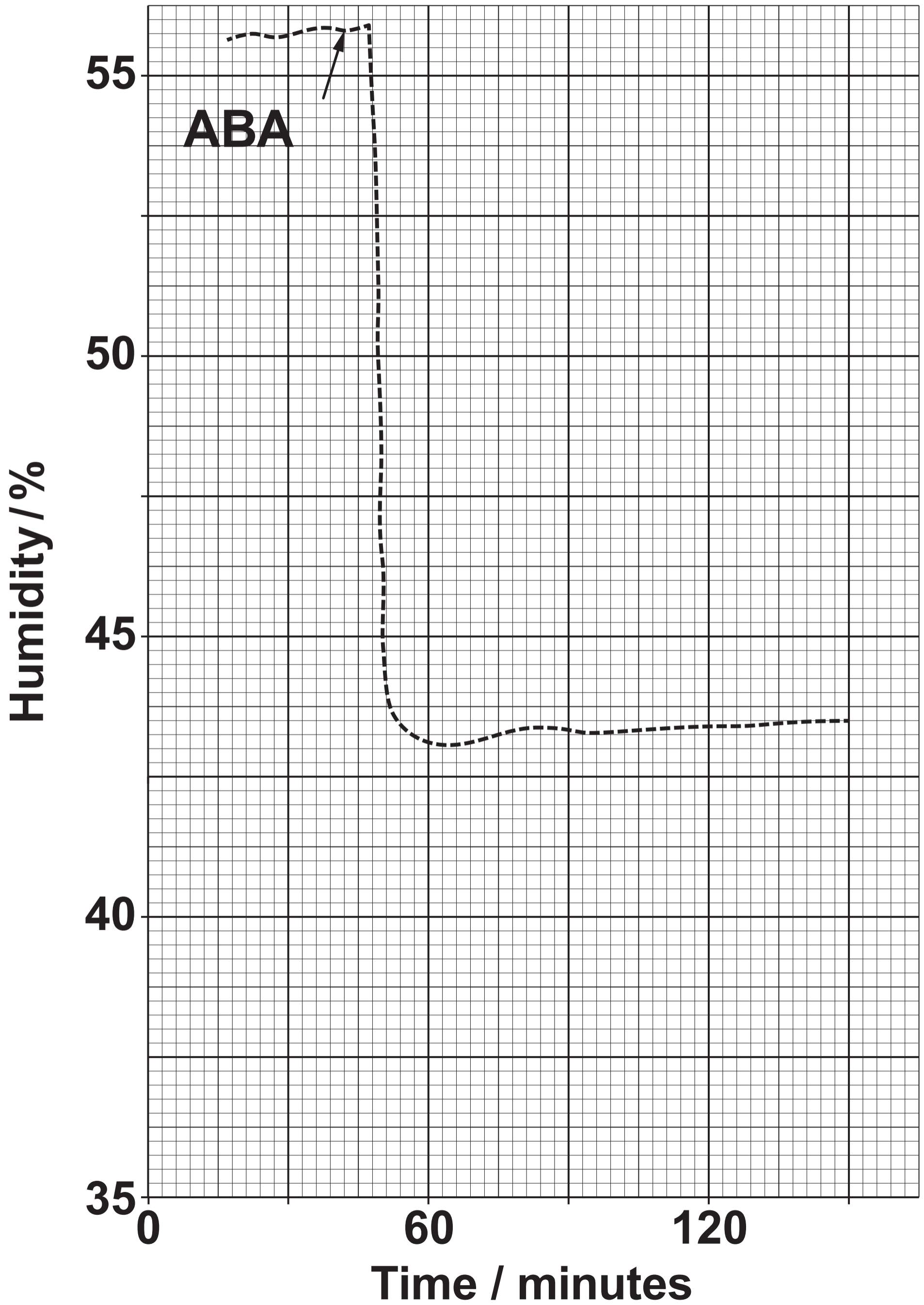
DIAGRAM 3



7(c) Abscissic acid (ABA) is a plant hormone that is produced in roots in response to soil water shortage. It is then transported to guard cells. An investigation was carried out to determine the effect of ABA on the humidity of air surrounding a bean leaf (*Phaseolus vulgaris*).

A bean leaf stalk was cut underwater and the leaf inserted into an illuminated, transparent chamber. The lamina of the experimental leaf was held at right angles to the light source. The leaf was supplied with air at a constant humidity. The humidity of the air leaving the chamber was then measured using an analyser. The apparatus used is shown in DIAGRAM 3 opposite.

GRAPH 1



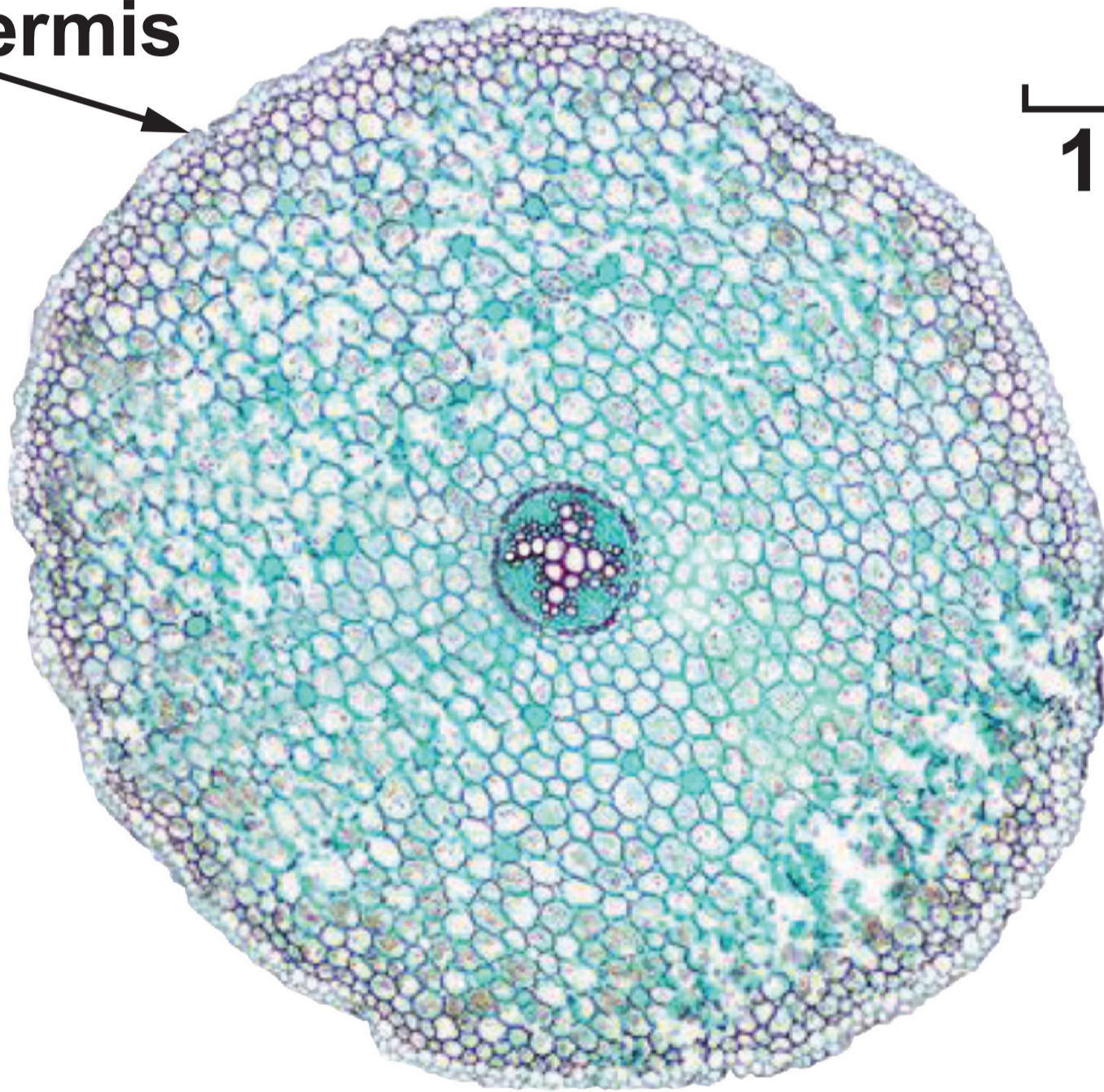
After 40 minutes, ABA was added to the distilled water. The results are shown in GRAPH 1 opposite.

7(c) (i) Explain why the bean leaf stalk was cut underwater. [2]

56

14

epidermis



1.0 mm

8. Most plants are unable to survive in waterlogged soil because air spaces between soil particles become filled with water.

The photomicrograph opposite shows a transverse section through the root of a dicotyledonous plant.

Describe the pathways by which water passes from the cells of the epidermis across the cortex of the root and then into the vascular tissue of a plant growing in well-drained soil.

Explain why a plant growing in waterlogged soil experiences a reduction in root pressure. [9 QER]

9

END OF PAPER

