



Surname _____

Forename(s) _____

Centre Number _____

Candidate Number _____

Candidate Signature _____

I declare this is my own work.

GCSE STATISTICS

H

Higher Tier Paper 2

8382/2H

Monday 17 June 2024

Afternoon

Time allowed: 1 hour 45 minutes

At the top of the page, write your surname and forename(s), your centre number, your candidate number and add your signature.

[Turn over]




JUN 24 83822H01

MATERIALS

For this paper you must have:

- a calculator
- mathematical instruments.

**INSTRUCTIONS**

- Use black ink or black ball-point pen. Draw diagrams in pencil.
- Answer ALL questions.
- You must answer the questions in the spaces provided. Do not write on blank pages.
- If you need extra space for your answer(s), use the lined pages at the end of this book. Write the question number against your answer(s).
- Do all rough work in this book. Cross out any work you do not want to be marked.



INFORMATION

- **The marks for questions are shown in brackets.**
- **The maximum mark for this paper is 80.**
- **You may ask for more answer paper and graph paper.
These must be tagged securely to this answer booklet.**

DO NOT TURN OVER UNTIL TOLD TO DO SO



Answer ALL questions in the spaces provided.

1 The index number for the price of a bike is

- 100 in 2020**
- 97 in 2022.**

What is the percentage change in price from 2020 to 2022?

Circle your answer. [1 mark]

Decrease of 3%

Decrease of 97%

Increase of 3%

Increase of 97%



2 In a town, 30% of the population are children.

An interviewer decides to collect data in the town centre from a sample of

15 children

and

35 people who are not children.

Which name best describes the interviewer's sampling method?

Circle your answer. [1 mark]

Convenience

Quota

Random


Systematic

[Turn over]



3 **Matteus is researching the history of his village.**

He finds a record of the people who died in 1909 and draws this stem and leaf diagram.



KEY: 1 | 2 = 12 years



Which ONE of these statements about the people who died in 1909 is true?

Tick (✓) a box. [1 mark]

Five people died in their 30s.

More people died younger than 45 years than died older than 45 years.

Nobody died that was older than 70 years.

The youngest person was aged 6 years.

4 Circle the pair of numbers that do NOT have a geometric mean. [1 mark]

-4, 6

0.5, 6

1, 6

4, 6

[Turn over]

4





5 Arne has produced a new fitness app.

He records the number of downloads per week, for 8 consecutive weeks.

WEEK	1	2	3	4	5	6	7	8
DOWNLOADS	500	520	580	600	680	720	600	840

5 (a) Arne says,
“520 people used the app in week 2.”

Is he correct?

Tick (✓) a box, on the opposite page.



Yes

No

Cannot tell

Give a reason for your answer. [1 mark]

9

[Turn over]



5 (b) Here are the data again, with some 4-point moving averages completed.

WEEK	1	2	3	4	5	6	7	8
DOWNLOADS	500	520	580	600	680	720	600	840
MOVING AVERAGE			550	595	645	650		

Complete the table by calculating the missing 4-point moving average.
[2 marks]



1
1

BLANK PAGE

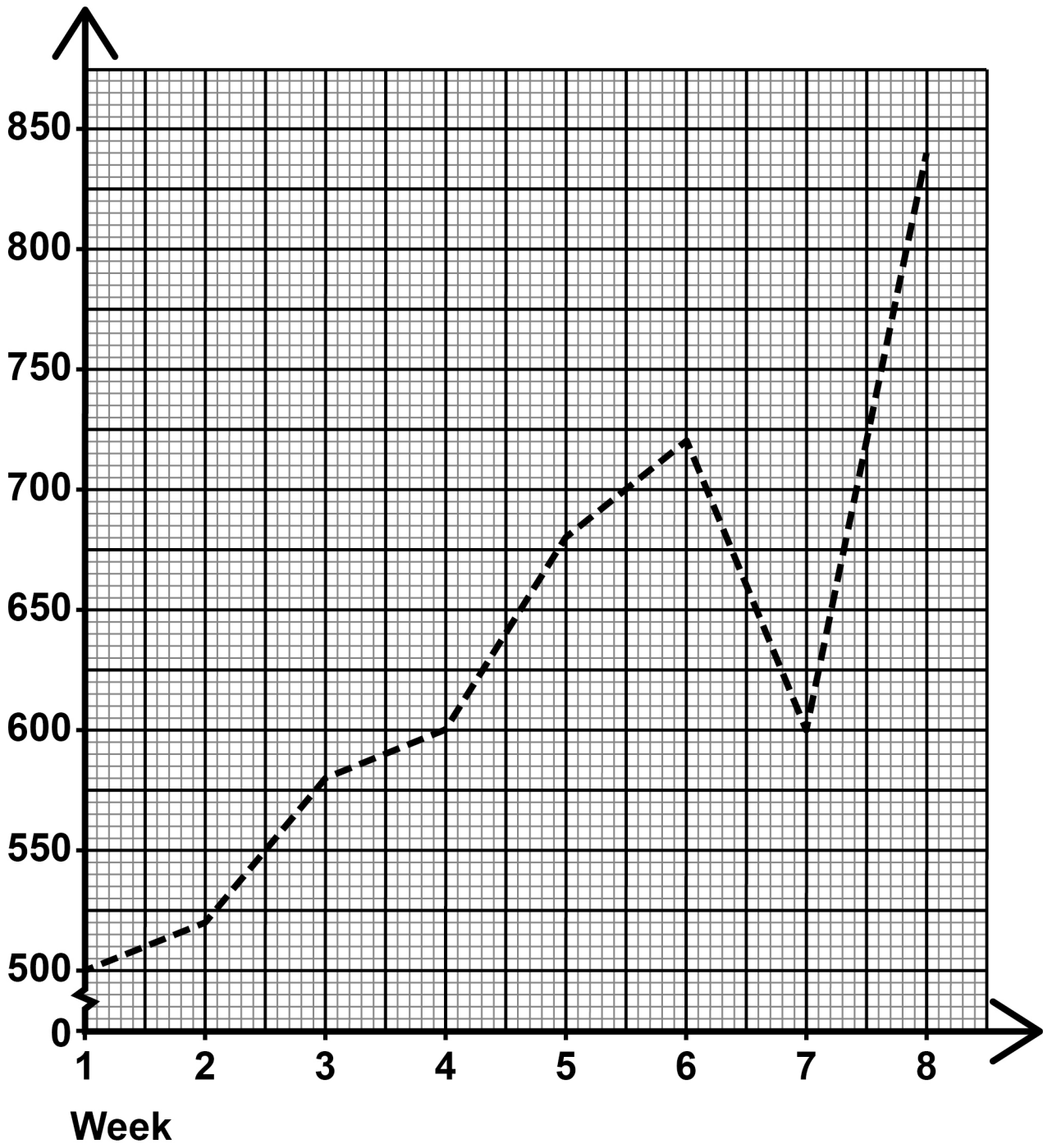
[Turn over]

5 (c) The time series graph, on the opposite page, shows the data for the 8 weeks.

Plot the 4-point moving averages, from page 10, AND draw the trend line, on the opposite page. [3 marks]

5 (d) Describe the trend, in context. [1 mark]

Downloads



[Turn over]

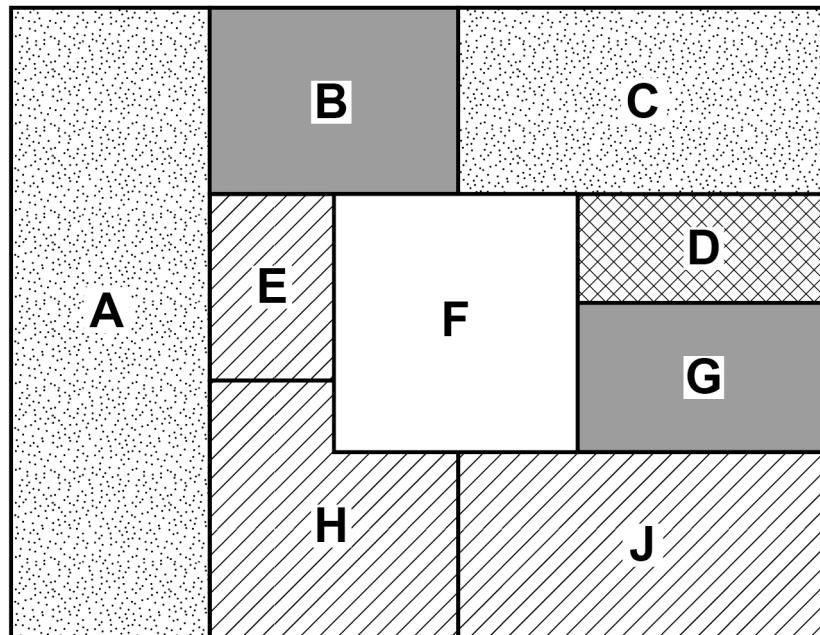
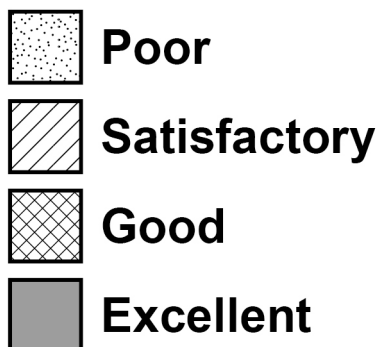
$\frac{\quad}{7}$



6

A farmer rates how well crops grow in her nine fields.

The choropleth map represents the fields on her farm and some of her ratings.

**KEY**

- 6 (a) The farmer has the same number of fields rated good as are rated excellent.

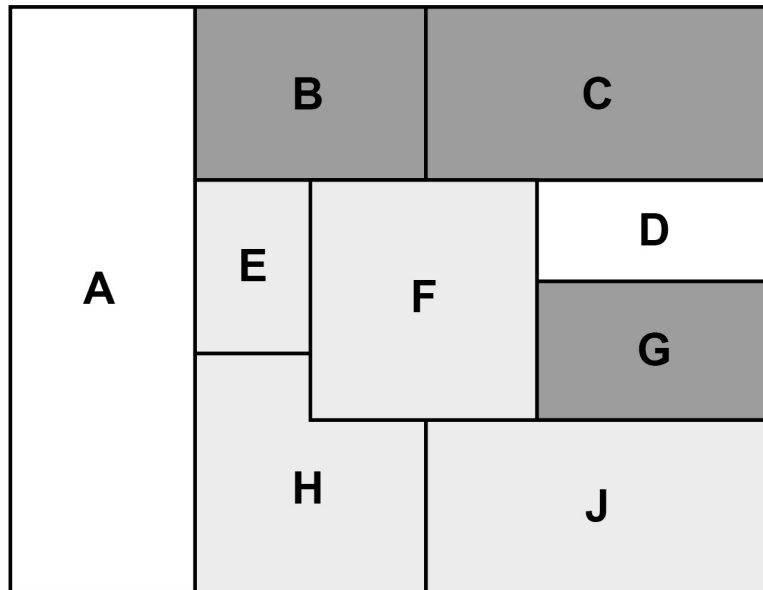
Complete field F on the choropleth map.
[1 mark]

[Turn over]



- 6 (b) Here is a different choropleth map of the same nine fields.

This map shows the amount of fertiliser the farmer used on each field.



KEY

- Least fertiliser
-
- Most fertiliser

The farmer makes the conclusion,
“The fields that had more fertiliser produced better quality crops.”



Comment on her conclusion by comparing the TWO choropleth maps, opposite and on page 14.

You should give a reason for and a reason against her conclusion. [2 marks]

Reason for _____

Reason against _____

[Turn over]



6 (c) Give ONE way the farmer could gain a greater amount of detail from the choropleth maps. [1 mark]

6 (d) Write down ONE possible extraneous variable. [1 mark]

5

BLANK PAGE

[Turn over]



- 7 A type of fraud is when money is taken from you without your permission.

Money can be taken from your bank account, when shopping, or in other ways.

These frauds can take place online or offline.

The table shows data, in thousands, about some of these frauds that took place in 2020–2021.

	BANK ACCOUNT	SHOPPING	OTHER	TOTAL
ONLINE	809	853	240	1902
OFFLINE	1073	116	181	1370
TOTAL	1882	969	421	3272

Adapted from ONS

- 7 (a) One of these frauds is selected at random.

Write down the probability that it happened online. [1 mark]

Answer _____



7 (b) Work out the probability that the fraud was NOT a bank account fraud. [2 marks]

Answer _____

7 (c) Work out the probability that it was a shopping fraud given that it happened offline. [2 marks]

Answer _____

[Turn over]

5



8 **342 teenagers were asked if they had ever spent a night alone at home.**

58 of these teenagers said that they had.

8 (a) **Calculate the percentage of these teenagers who said that they had spent a night alone at home. [2 marks]**

Answer _____ **%**



- 8 (b) Estimate the percentage of ALL teenagers who have spent a night alone at home.

Answer _____ %

State one assumption you have made.
[2 marks]

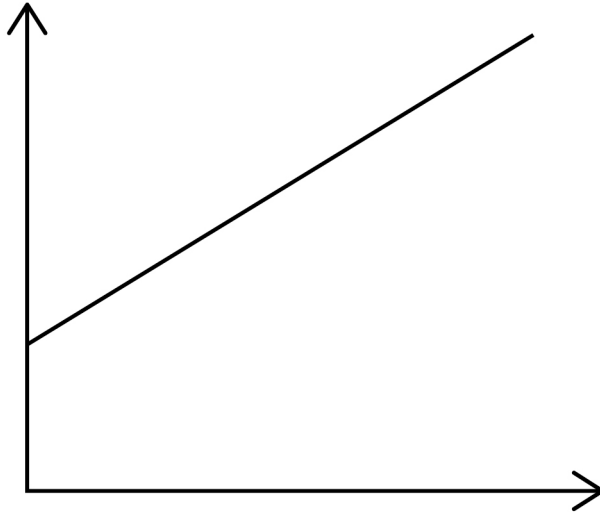
[Turn over]

—
4



- 9 The diagram shows information about sales of ice cream and sales of sunscreen.

Sales of
ice cream
(tonnes)



Sales of sunscreen
(1000 litres)

Russ says,

“Increased sunscreen sales are causing increased ice cream sales.”

He is not correct.



Write down a factor that may affect BOTH sales of sunscreen and sales of ice cream. [1 mark]

[Turn over]

—
1



10 Shona sells bags of three different types of dog food.

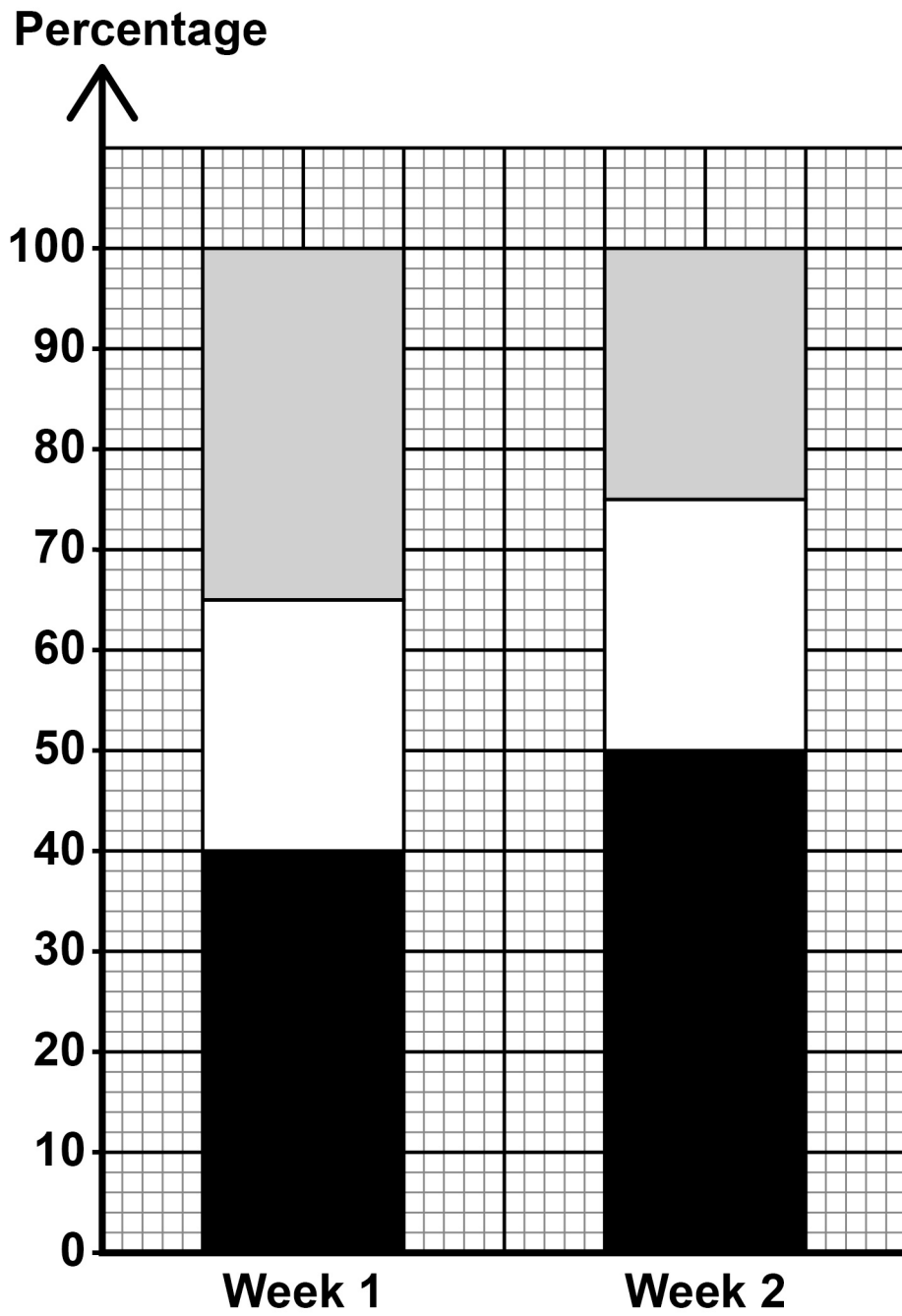
The percentage bar chart, on the opposite page, shows information about the sales of each type, for two weeks.




10 (a) Make TWO comparisons of the sales of dog food in Week 1 with the sales in Week 2. [2 marks]

Comparison 1 _____

Comparison 2 _____



**KEY**

-  Food C
-  Food B
-  Food A

[Turn over]



BLANK PAGE



10 (b) Shona says,

“The percentage of food sold in Week 1 that was Food B is 65%.”

Comment on this statement. [1 mark]

[Turn over]

3



11 **300 runners take part in a parkrun.**

Franco is investigating how far the runners travel to get to the parkrun.

The table shows information about how they travel to the parkrun.

	CAR	WALK	CYCLE	OTHER
CHILD	90	28	41	2
ADULT	108	12	16	3

Franco uses stratification before sampling 50 runners.

11 (a) **Give a reason why stratification is appropriate.**
[1 mark]



11 (b) Franco says he needs 33 runners in his sample who travel by car.

Is he correct?

Show working to support your answer.

Tick (✓) a box.

Yes

No

[2 marks]

[Turn over]



BLANK PAGE



11 (c) Stef also uses stratification before sampling the same 300 runners.

In her sample, there are exactly 9 runners who are ADULT and travel by CAR.

Work out how many runners are in Stef's sample. [2 marks]

Answer _____

[Turn over]

5





12 Mair is investigating how many hours people sleep per night.

Here is some information about how many hours 120 people slept for one night.

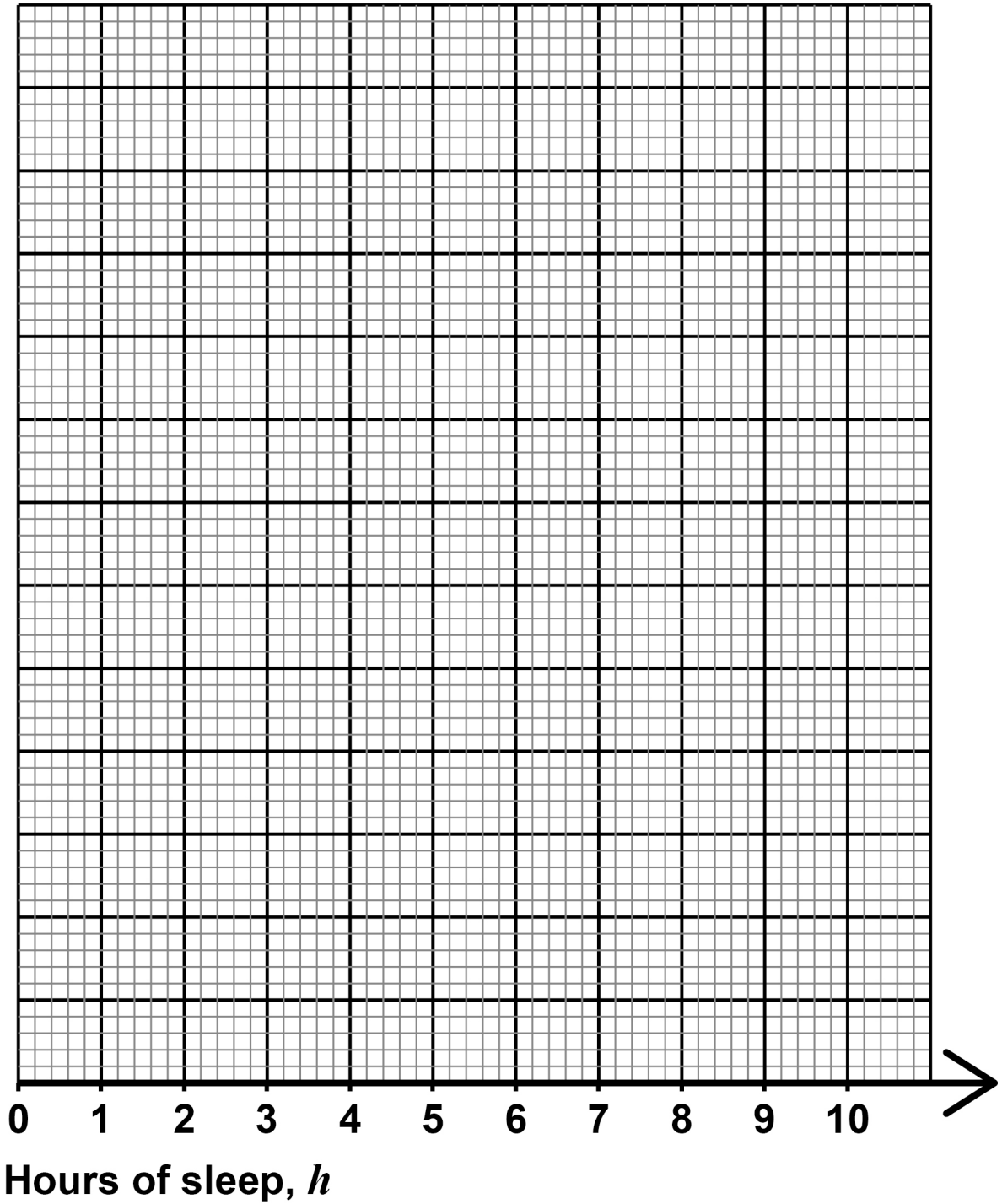
HOURS OF SLEEP, h	$0 < h \leq 2$	$2 < h \leq 4$	$4 < h \leq 6$	$6 < h \leq 8$	$8 < h \leq 10$
FREQUENCY	5	13	42	45	15

BLANK PAGE

[Turn over]



- 12 (a) On the grid, draw a cumulative frequency diagram for Mair's data. [4 marks]



12 (b) Estimate the probability that a person, chosen at random, slept for more than 7 hours that night. [2 marks]

Answer _____

[Turn over]

6



13 A bag of sweets contains only Aniseed, Butterscotch and Chewies.

There are 40 sweets in the bag.

11 of the sweets are Aniseed.

16 of the sweets are Butterscotch.

TWO sweets are taken from the bag at random without replacement.

Work out the probability that AT LEAST ONE of the sweets is a Chewie. [3 marks]

Answer _____

[Turn over]

<hr/>
3



14 **A school wants to estimate the number of students who have missed school to avoid a test.**

720 students are given this survey with a fair, six-sided dice.

Roll the dice once.

If you roll a six, answer the question below honestly.

If you do NOT roll a six, tick Yes.

Have you ever missed school to avoid a test?

Tick (✓) a box.

Yes

No



14 (a) Explain why this is an appropriate method for the school to use. [1 mark]

14 (b) 634 students tick Yes.

Work out an estimate of how many students answer the question honestly AND tick Yes. [1 mark]

Answer _____

[Turn over]

— 2



15 Clara is on a course that has three modules.

Each module has a different weighting.

Some information about the weightings and her marks is shown in the table.

MODULE	WEIGHTING	MARK
A	30	26
B	40	
C	90	74

15 (a) The weighted mean of Clara's marks is 60

Work out Clara's mark for Module B. [5 marks]



BLANK PAGE



15 (b) The course leader decides to reduce the weighting of each module by 10

Clara says,

“The weighting of each module has been reduced by the same amount, so my weighted mean will not change.”

Comment on her statement. [1 mark]

[Turn over]

6



16 Dorota owns a café.

Customers either order to ‘eat in’ or order to ‘take away’.

The probability that a customer will ‘eat in’ is 0.3

16(a) Dorota says,

“There is a 70% probability that the next customer orders to ‘take away’.”

Comment on her statement. [1 mark]

16 (b) Dorota selects a random sample of 5 orders.

16 (b) (i) Use the Binomial distribution to show,
“the probability that EXACTLY 4 of these orders are ‘eat in’ is 0.02835”. [2 marks]

[Turn over]



16 (b)(iii) Dorota has assumed that each order is independent.

Comment upon the validity of her assumption. [1 mark]

[Turn over]

— 7



- 17 A group of 10 students take a biology test. They record the time (x minutes) it takes them to complete the test.

Their times are summarised as

mean = 40.4 minutes

$$\sum x^2 = 17\,960$$

- 17 (a) Calculate the standard deviation of the times the students take to complete the biology test.

Use the formula

$$\text{Standard deviation} = \sqrt{\frac{\sum x^2}{n} - \left(\frac{\sum x}{n}\right)^2}$$

[2 marks]

Answer _____ minutes



17 (b) The same 10 students also take a chemistry test.

The times it takes these students to complete the chemistry test are summarised as

mean = 41.5 minutes

standard deviation = 18.7 minutes.

Compare statistically the times these students take to complete the two tests. [2 marks]

Comparison 1 _____

Comparison 2 _____

[Turn over]

4



BLANK PAGE



18 In a data set,

$$\text{median} = x$$

$$\text{mean} = 2x$$

x is a positive number.

Explain why the set of data **CANNOT** be normally distributed. [1 mark]

[Turn over]

—
1



- 19 Sid and Bobbi are investigating what music they each like.

Sid has this hypothesis to investigate.

“We like similar music.”

They both listen to 8 songs, A to H.

They each score the songs out of 6

	A	B	C	D	E	F	G	H
SID'S SCORES	3	3.5	2	2.8	1	4.7	0.7	3.9
BOBBI'S SCORES	3.1	5	1.2	3.2	1.7	4.6	1	3.1

- 19 (a) Complete the scatter diagram, on the opposite page.

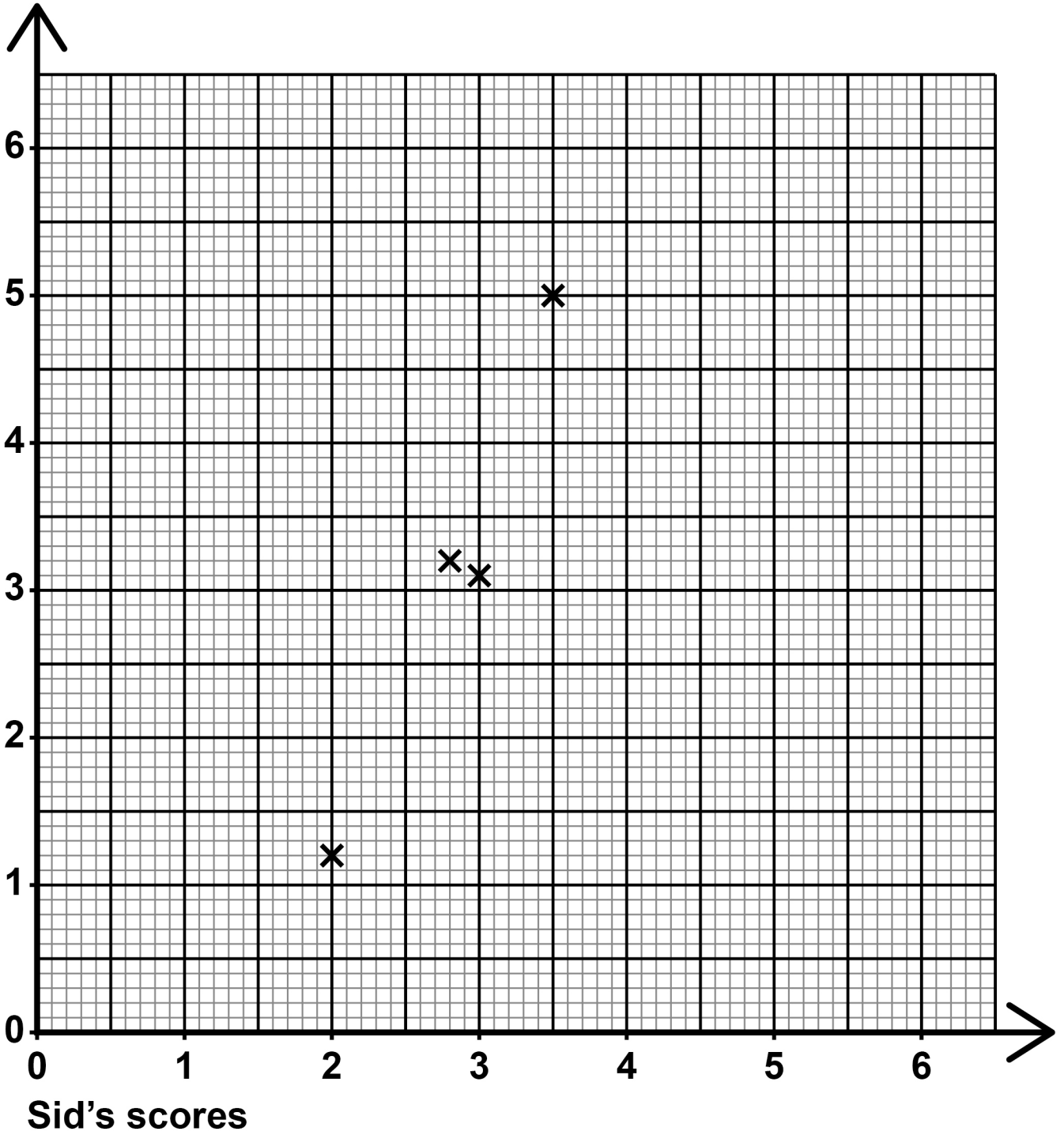
The first four points have been plotted for you.
[2 marks]

- 19 (b) What type of correlation is shown by the scatter diagram? [1 mark]

Answer _____



Bobbi's scores



[Turn over]



BLANK PAGE



19 (c) (ii) Sid gives a new song a score of 4.5

Use your line of best fit to estimate the score that Bobbi would give this song. [1 mark]

Answer _____

19 (c) (iii) Bobbi gives a different song a score of 6

She extends the line of best fit and uses it to estimate the score that Sid would give for the song.

Explain why her estimate may NOT be reliable. [1 mark]

BLANK PAGE

[Turn over]



19 (d) Here are the original scores again.

	A	B	C	D	E	F	G	H
SID'S SCORES	3	3.5	2	2.8	1	4.7	0.7	3.9
BOBBI'S SCORES	3.1	5	1.2	3.2	1.7	4.6	1	3.1

By calculating the value of Spearman's rank correlation coefficient between these two sets of scores, comment on Sid's hypothesis.

$$r_s = 1 - \frac{6 \sum d^2}{n(n^2 - 1)}$$

[6 marks]



19 (e) Suggest ONE possible problem with using the given data to test Sid's hypothesis. [1 mark]

- 19 (f) Bobbi says that they would get a more reliable value for Spearman's rank correlation coefficient if they give each song a score out of 10, instead of out of 6

Is she correct?

Tick (✓) a box.

Yes

No

Give a reason for your answer. [1 mark]

END OF QUESTIONS

17



BLANK PAGE

For Examiner's Use	
Question	Mark
1-4	
5	
6	
7	
8	
9	
10	
11	
12	
13	
14	
15	
16	
17	
18	
19	
TOTAL	

Copyright information

For confidentiality purposes, all acknowledgements of third-party copyright material are published in a separate booklet. This booklet is published after each live examination series and is available for free download from www.aqa.org.uk.

Permission to reproduce all copyright material has been applied for. In some cases, efforts to contact copyright-holders may have been unsuccessful and AQA will be happy to rectify any omissions of acknowledgements. If you have any queries please contact the Copyright Team.

Copyright © 2024 AQA and its licensors. All rights reserved.

WP/M/SB/Jun24/8382/2H/G4004/V5