



Surname \_\_\_\_\_

Forename(s) \_\_\_\_\_

Centre Number \_\_\_\_\_

Candidate Number \_\_\_\_\_

Candidate Signature \_\_\_\_\_

I declare this is my own work.

**A-level**

**BIOLOGY**

**Paper 1**

**7402/1**

**Wednesday 7 June 2023**

**Afternoon**

**Time allowed: 2 hours**

**At the top of the page, write your surname and other names, your centre number, your candidate number and add your signature.**

**[Turn over]**



**BLANK PAGE**



**MATERIALS**

For this paper you must have:

- a ruler with millimetre measurements
- a scientific calculator.

**INSTRUCTIONS**

- Use black ink or black ball-point pen.
- Answer ALL questions.
- You must answer the questions in the spaces provided. Do not write on blank pages.
- If you need extra space for your answer(s), use the lined pages at the end of this book. Write the question number against your answer(s).
- Show all your working.
- Do all rough work in this book. Cross through any work you do not want to be marked.

**INFORMATION**

- The marks for the questions are shown in brackets.
- The maximum mark for this paper is 91.

**DO NOT TURN OVER UNTIL TOLD TO DO SO**



Answer ALL questions in the spaces provided.

01.1

Give the **THREE** structural features found in **ALL** virus particles **AND** describe the function of **ONE** of these features. [2 marks]

1 \_\_\_\_\_

2 \_\_\_\_\_

3 \_\_\_\_\_

Function of **ONE** named feature \_\_\_\_\_

\_\_\_\_\_

\_\_\_\_\_

\_\_\_\_\_

\_\_\_\_\_





**01.3**

**Give ONE reason why antibiotics are NOT effective against viruses. [1 mark]**

---

---

---

---

—
<b>5</b>



**BLANK PAGE**

**[Turn over]**

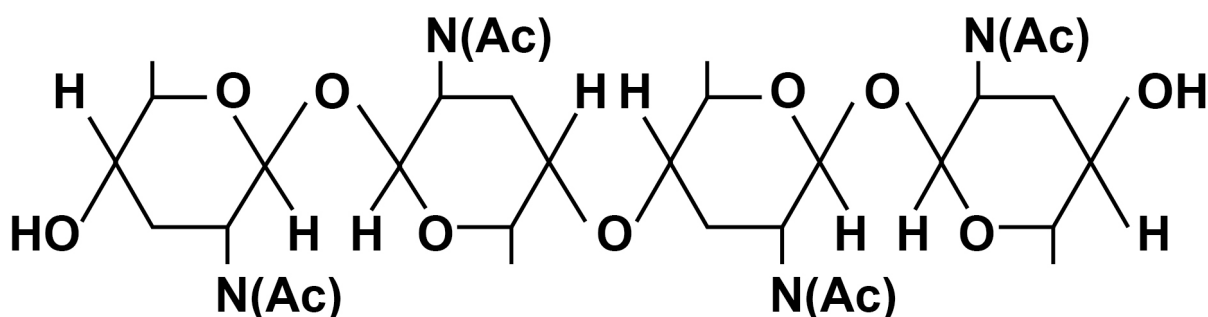
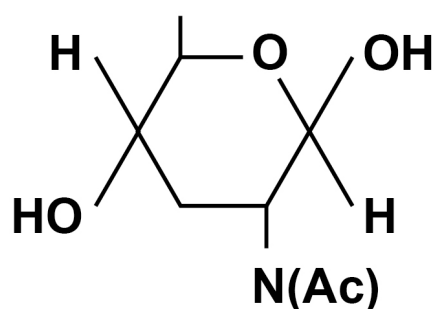


02.1

Chitin is a polysaccharide. The chitin monomer is a  $\beta$ -glucose molecule with one OH group replaced by an  $\text{NHCOCH}_3$  group.  $\text{NHCOCH}_3$  can be represented by  $\text{N(Ac)}$ .

FIGURE 1 shows the monomer that forms chitin and the chitin polymer.

FIGURE 1



Chitin has a similar structure to cellulose.

Use **FIGURE 1** to describe **THREE** ways the structure of chitin is similar to the structure of cellulose. [3 marks]

1

---

---

---

---

2

---

---

---

---

3

---

---

---

---

[Turn over]







**03.1**

The human disease, malaria, is caused by infection with a single-celled eukaryotic organism.

**FIGURE 2**, on the opposite page, shows a diagram of 'Plasmodium vivax', one of the species that can cause malaria.

Other than the Golgi apparatus, name **ONE** structure in **FIGURE 2** which shows that 'P. vivax' is a eukaryote.  
[1 mark]

---

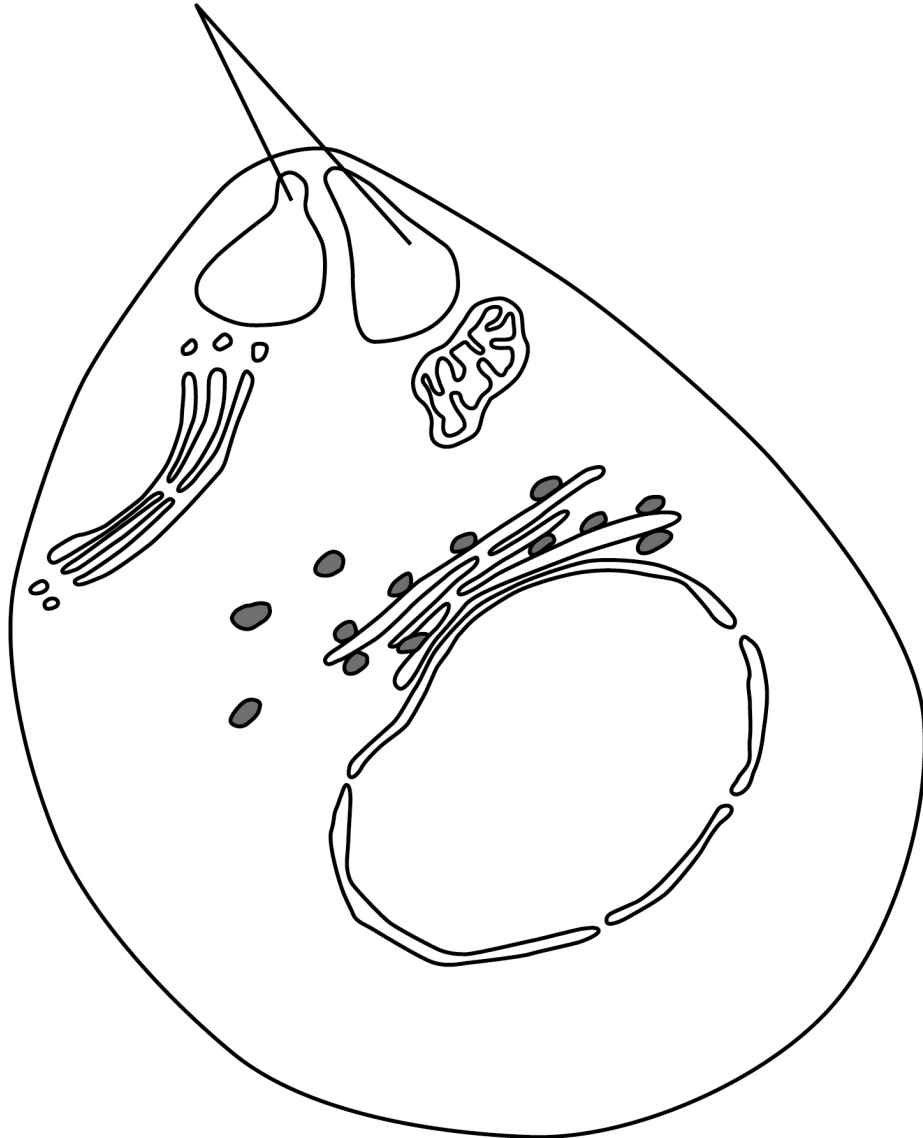
---

---



**FIGURE 2**

**Structures  
containing enzymes  
that allow 'P. vivax'  
to enter human cells**



**[Turn over]**



03.2

**Describe TWO functions of the Golgi apparatus in a eukaryotic cell. [2 marks]**

1

---

---

---

---

2

---

---

---

---



**'P. vivax' evolved from a common ancestor in Africa. As humans migrated around the world, new strains of 'P. vivax' evolved.**

**'P. vivax' is now extremely rare in Africa but there are several different strains of 'P. vivax' in other parts of the world.**

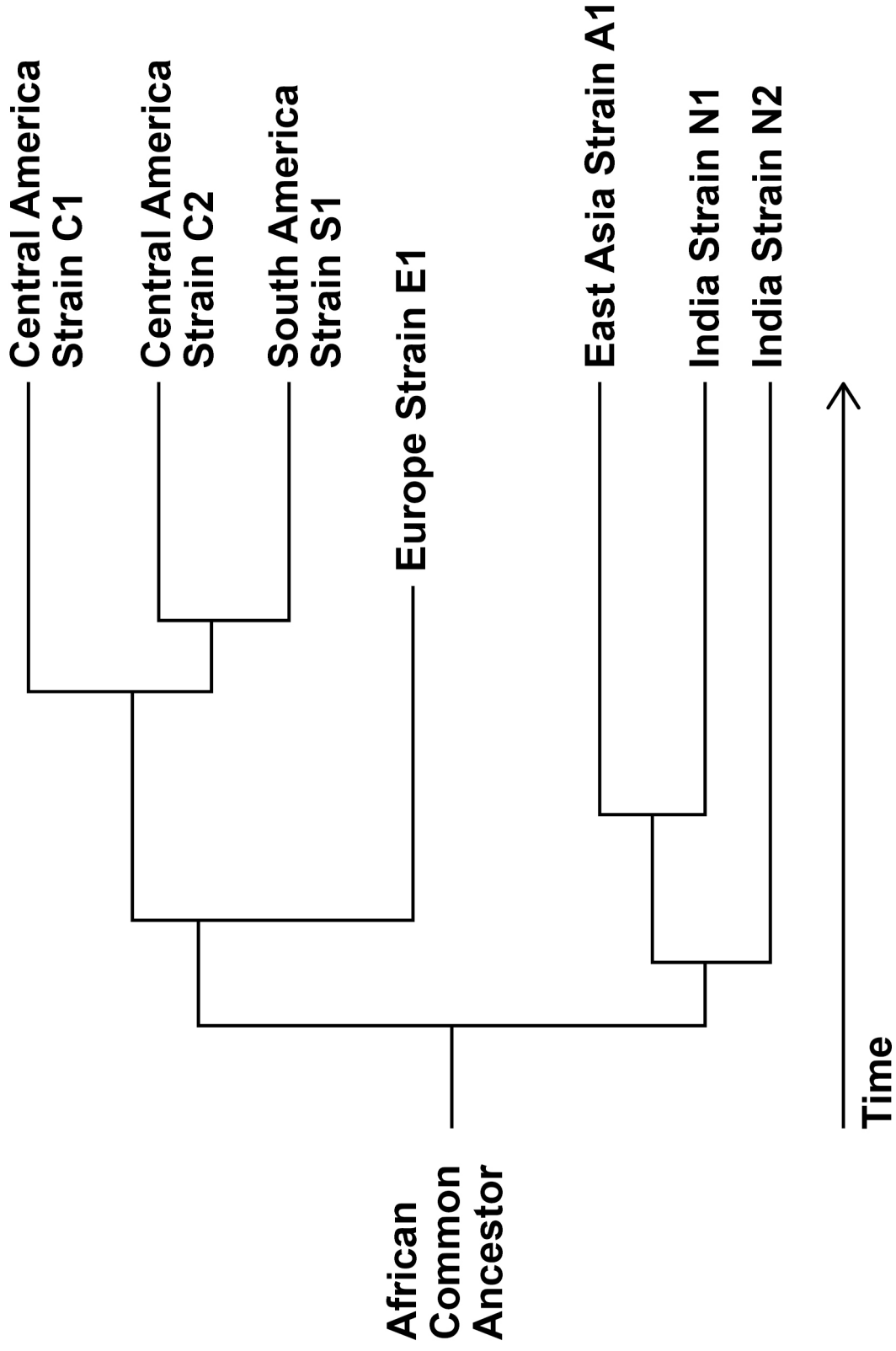
**FIGURE 3, on page 16, shows a phylogenetic diagram of the evolution of these different strains.**

**[Turn over]**





**FIGURE 3**





03.3

What does FIGURE 3 suggest is the order of human migration out of Africa?  
[1 mark]

Tick (✓) ONE box.

Europe, India, East Asia, Central America, South America

India, East Asia, Europe, South America, Central America

India, Europe, East Asia, Central America, South America

South America, Central America, East Asia, Europe, India

[Turn over]

**BLANK PAGE**



**03.4**

**There are an estimated 229 million cases of human malaria worldwide per year.**

**94% of these cases are found in Africa, but are not caused by 'P. vivax'.**

**'P. vivax' does cause 61% of the cases of human malaria outside Africa.**

**Use this information to calculate the number of cases worldwide caused by 'P. vivax' each year. [1 mark]**

**Answer \_\_\_\_\_ cases of malaria**

**[Turn over]**





---

---

---

---

---

---

---

---

---

---

[Turn over]

9
---



**04.1**

**Some hospital patients suffer from diarrhoea caused by infection with the bacterium 'Clostridium difficile'. The 'C. difficile' bacteria release toxins. These toxins cause the diarrhoea.**

**The toxins damage the cells lining the ileum, causing them to lose their microvilli. The damage to the cells reduces the absorption of the products of digestion and reduces the absorption of water, resulting in diarrhoea.**

**Explain why the damage to the cells lining the ileum reduces absorption of the products of digestion AND why this reduces absorption of water. [3 marks]**

---

---

---

---

---

---

---

---

---

---



---

---

---

---

---

---

---

**[Turn over]**



**Not all patients in hospital with 'C. difficile' develop diarrhoea.**

**Scientists measured the anti-toxin antibody concentration in hospital patients with and without 'C. difficile' infection.**

**They measured the anti-toxin antibody concentration FOUR times:**

- **on admission to hospital (day 0)**
- **on day 3**
- **on day 6**
- **on the day the patient left the hospital.**

**FIGURE 4, on page 26, shows the scientists' results.**



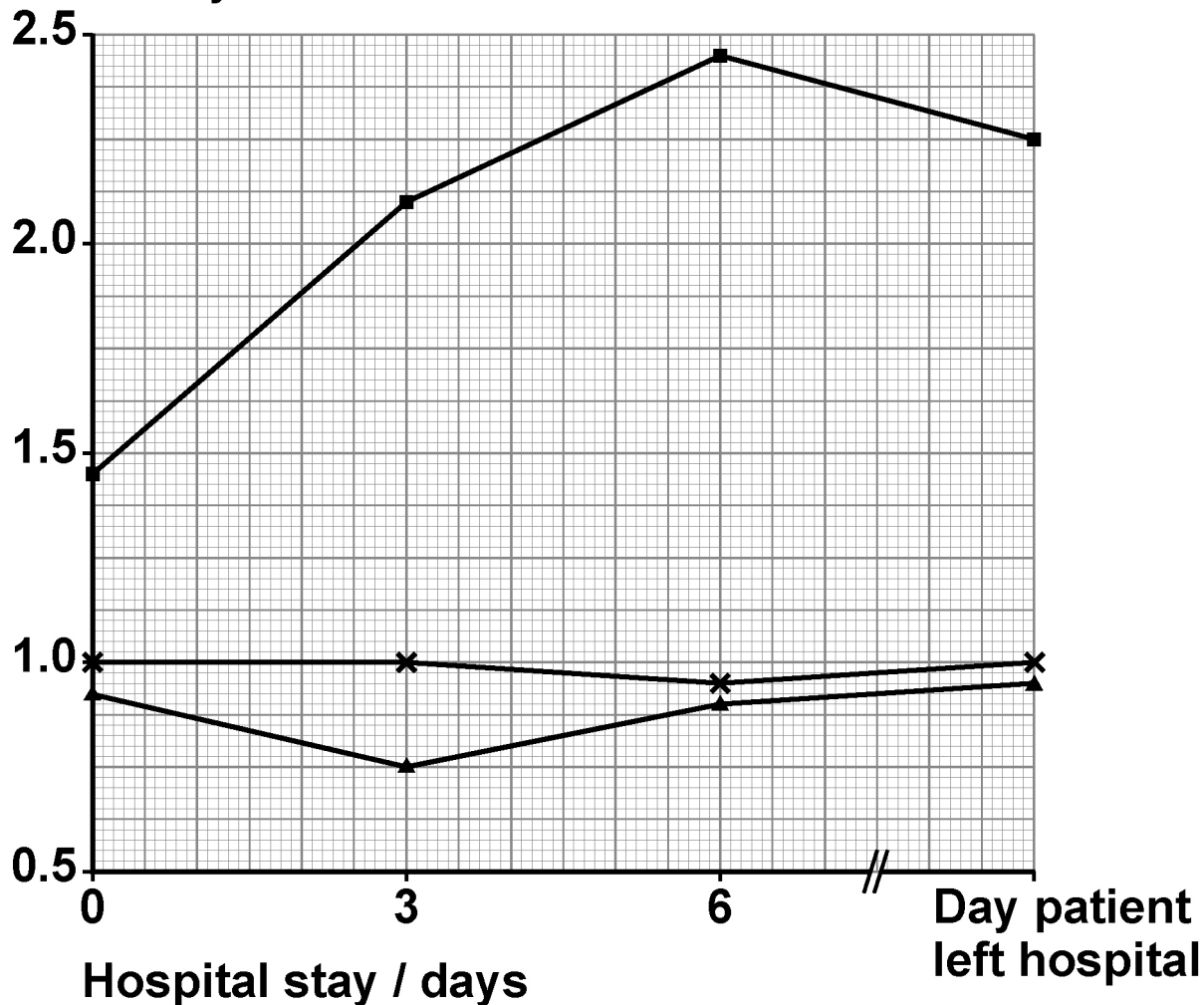
**BLANK PAGE**

**[Turn over]**



FIGURE 4

Mean anti-toxin  
antibody  
concentration  
/ arbitrary units



## KEY

- Patients with 'C. difficile' infection but NO diarrhoea
- ×—× Patients without 'C. difficile' infection
- ▲—▲ Patients with 'C. difficile' infection and diarrhoea





---

---

---

---

---

---

---

---

0 4 . 3

To be used as passive immunity treatment, the anti-toxin antibody would be injected.

If it was given by mouth, it would be digested.

Describe how the anti-toxin antibody would be digested. [3 marks]

---

---

---

---

---





**05**

**A student investigated the use of cinnamon oil as an antimicrobial substance.**

**She investigated the effect of cinnamon oil on the growth of five different bacterial cultures grown on agar plates.**

**05.1**

**The student added 100 mm<sup>3</sup> of each bacterial culture from its glass bottle onto a separate agar plate. She spread each bacterial culture evenly over the agar using a spreader.**

**Describe the aseptic techniques she should use.**

**[3 marks]**

---

---

---

---

---

---

---

---





**05.2**

On each agar plate, the student cut a well (a hole) in the agar.

The well had a diameter of 6 mm. The student added 50 mm<sup>3</sup> of cinnamon oil into the well.

Calculate the minimum depth of the well to allow the addition of 50 mm<sup>3</sup> of cinnamon oil.

Use the following equation in your calculation:

Volume of a cylinder =  $\pi r^2 \times l$

Use 3.14 as the value for  $\pi$ .

Show your working. [2 marks]



Answer \_\_\_\_\_ mm

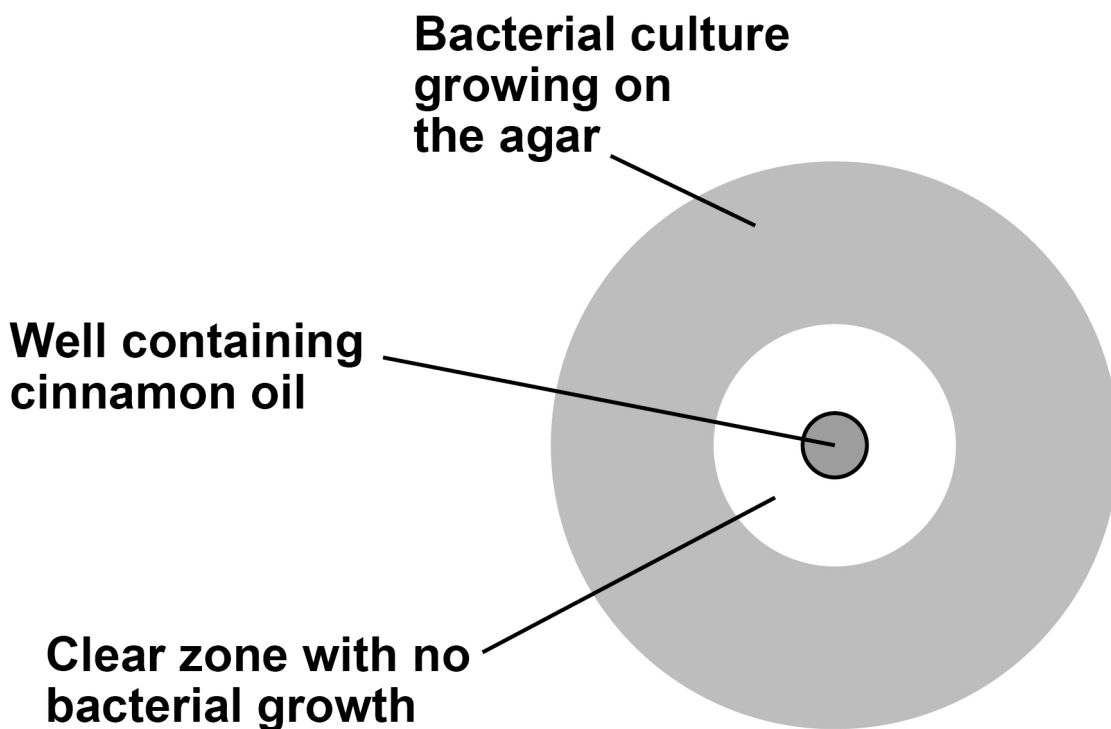
[Turn over]



The student kept the plates at 25 °C for 24 hours.

FIGURE 5 shows what one of her plates looked like after 24 hours.

FIGURE 5



The student measured the diameter of the clear zone with no bacterial growth around each well. She made these measurements to the nearest whole mm

TABLE 1, on page 36, shows her results.



**BLANK PAGE**

**[Turn over]**



TABLE 1

BACTERIAL CULTURE	DIAMETER OF CLEAR ZONE / mm		
	Cinnamon oil	Positive control	Negative control
'Bacillus' spp.	15	14	0
'Staphylococcus aureus'	20	17	0
'Listeria monocytogenes'	18	12	0
'Escherichia coli'	16	12	0
'Klebsiella' spp.	14	12	0
Median for all cultures			0
Mean for all cultures			0
Standard deviation for all cultures	2.4	2.2	0

05.3

Suggest exactly what the student added to the wells to get the positive control AND negative control results.  
[2 marks]





**05.5**

The mean  $\pm$  2 standard deviations includes over 95% of the data.

Use this information to consider whether the standard deviations suggest the differences in means are likely to be due to chance.

Explain your answer, including at least ONE calculation.  
[2 marks]

---

---

---

---

10



06.1

**Define genome and proteome. [2 marks]**

**Genome** \_\_\_\_\_

---

---

---

**Proteome** \_\_\_\_\_

---

---

---

**[Turn over]**



The classification system used in the early 20th century grouped different species of bacteria according to the position and shape of flagella on bacterial cells and by the number of flagella per cell. These were observed using an optical microscope.

Each species of bacterium has a characteristic cell shape and arrangement of flagella. These characteristics may be shared with other species within a genus.

Flagella are fragile, difficult to stain and may extend from the cell at any angle.

06.2

Consider the accuracy and limitations of the early classification of bacteria using the arrangement of flagella. [3 marks]

---

---

---

---

---

---

---



---

---

---

---

---

---

---

**[Turn over]**



**06.3**

**Suggest why several bacterial species have been renamed in recent years. [1 mark]**

---

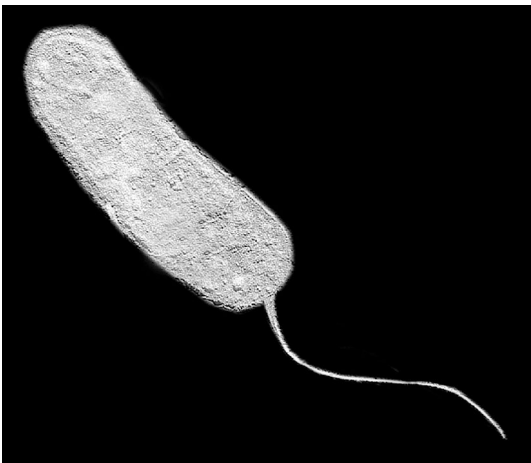
---

---

---

**06.4**

**FIGURE 6 shows an image from an optical microscope of a single bacterial cell.**

**FIGURE 6**

This bacterial cell is 2.3  $\mu\text{m}$  long (excluding the flagellum).

Calculate the magnification of this image.

Show your working. [2 marks]

Magnification  $\times$  \_\_\_\_\_

[Turn over]

8



**07.1**

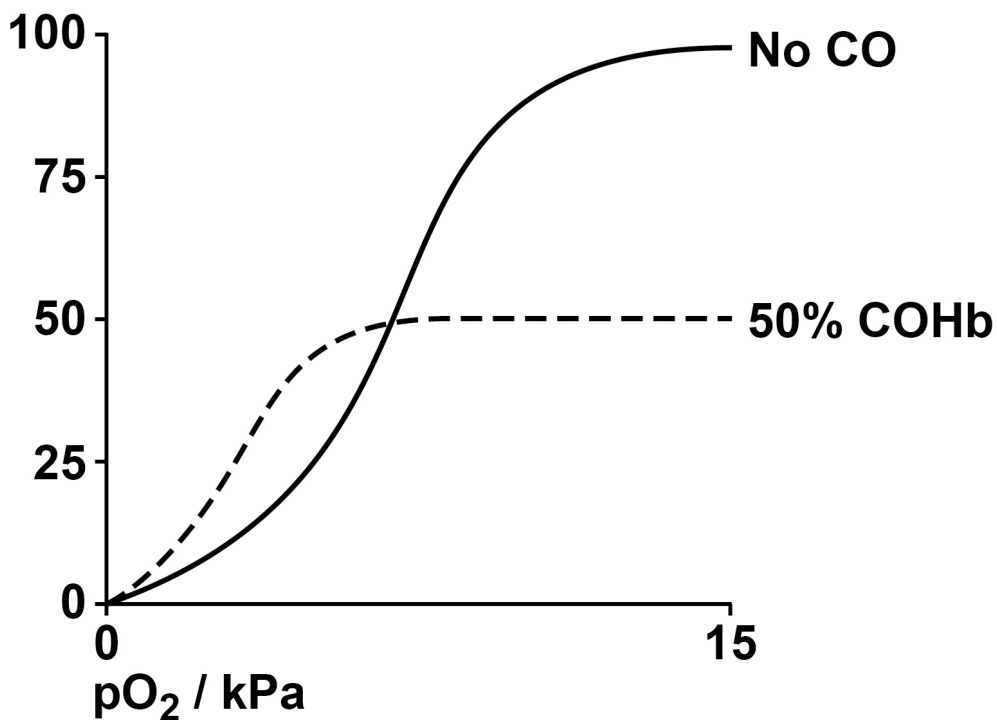
Carbon monoxide (CO) is released during incomplete combustion of fossil fuels.

FIGURE 7 shows the dissociation curve for oxyhaemoglobin when:

- NOT exposed to CO
- exposed to CO such that 50% of the oxygen binding sites are occupied by CO (50% COHb).

FIGURE 7

Percentage saturation with O<sub>2</sub>





07.2

The World Health Organisation (WHO) suggests that to avoid long-term health effects, COHb concentrations should be kept below 2.5%.

WHO recommends that people should not be exposed to:

- air with  $> 10 \text{ mg m}^{-3}$  CO for more than 8 hours
- air with  $> 30 \text{ mg m}^{-3}$  CO for more than 1 hour.

Scientists have used a mathematical model to calculate the exposure to carbon monoxide that would result in 2.5% COHb in both adults and children.

TABLE 2 shows the scientists' results.

TABLE 2

Exposure duration at rest / hours	CO concentration in the air / $\text{mg m}^{-3}$ resulting in 2.5% COHb	
	Child	Adult
1	31.2	40.2
8	9.6	10.6





**08.1**

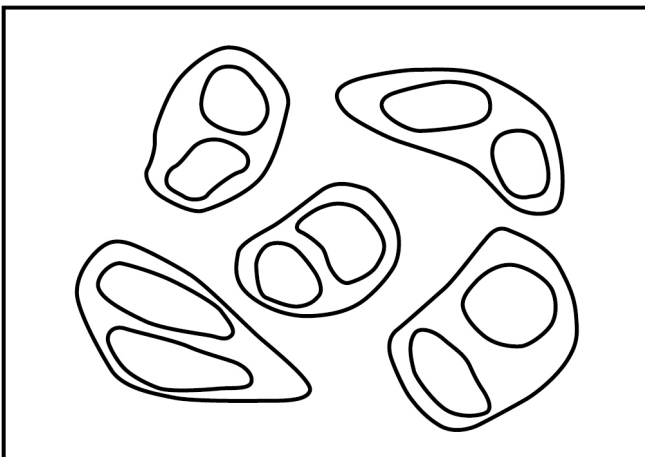
Scientists investigated a drug called MiTMAB as a treatment for cancer. MiTMAB inhibits cytokinesis.

FIGURE 8 shows drawings of cancer cells seen with an optical microscope from a:

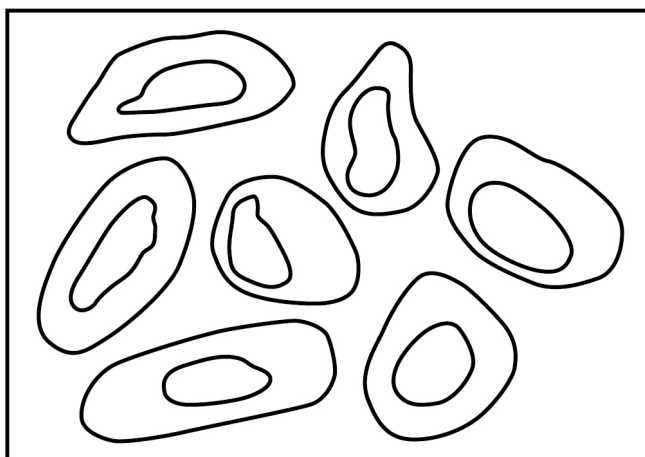
- sample treated with MiTMAB
- control sample.

**FIGURE 8**

**A**



**B**







**BLANK PAGE**

**[Turn over]**



**When active, dynamin has TWO functions:**

- **it stimulates cytokinesis**
- **it inhibits cell death.**

**The scientists treated actively growing cultures of cancer cells with MiTMAB.**

**They incubated:**

- **one sample of 2500 cells without MiTMAB as a control**
- **eight samples, each with 2500 cells and a different concentration of MiTMAB.**

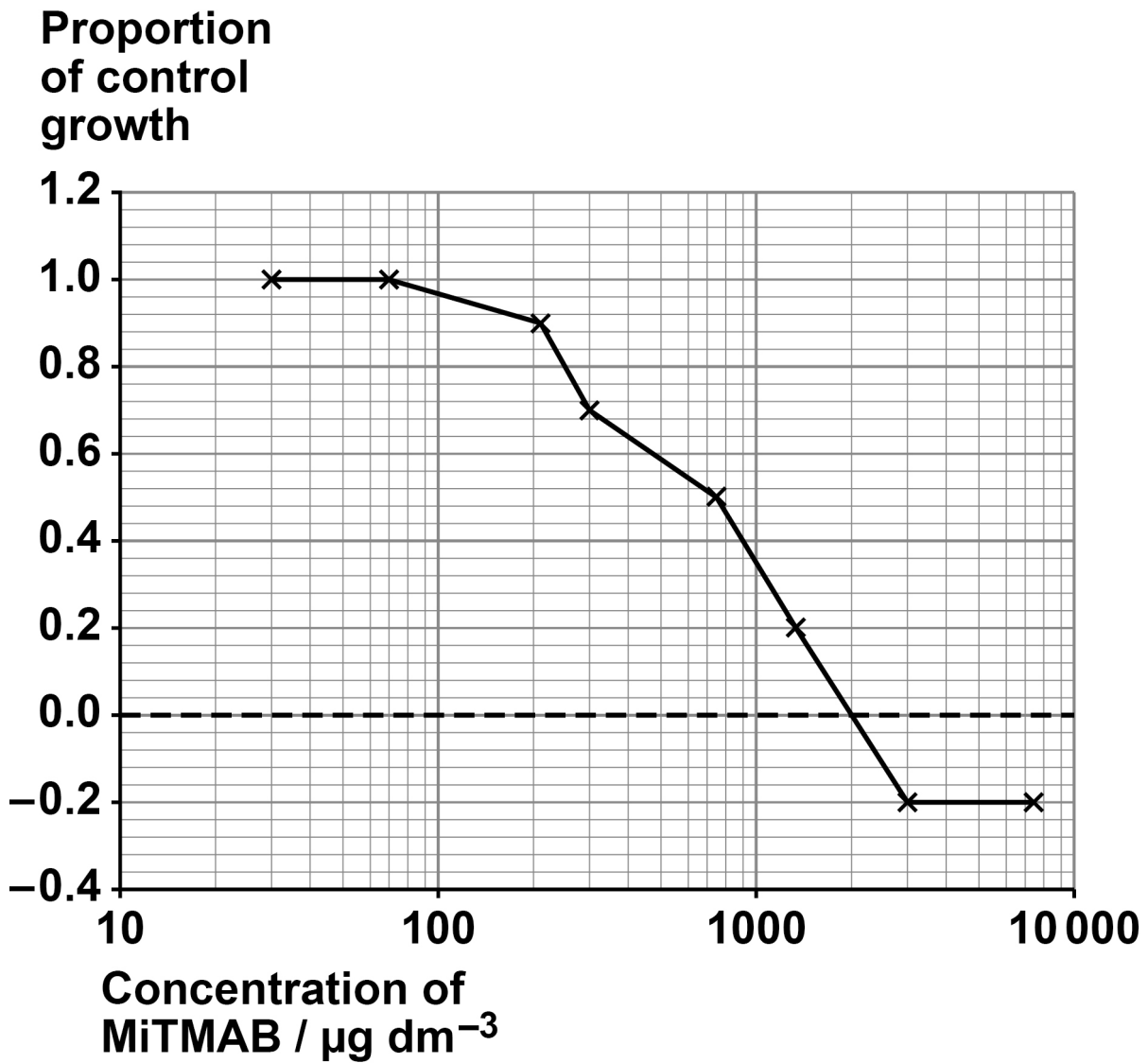
**After 72 hours, the scientists measured the number of cells in each sample.**

**FIGURE 9, on the opposite page, shows the scientists' results.**

**A negative value for proportion of control growth means that fewer than 2500 cells were counted after 72 hours.**



FIGURE 9



[Turn over]



**BLANK PAGE**





0	8	.	4
---	---	---	---

0.01 dm<sup>3</sup> of MiTMAB solution was added to the treated cells.

Calculate the increase in mass of MiTMAB (in  $\mu\text{g}$ ) added to the cells to reduce the cell growth from equal to the control to 0.0 of the control.

Show your working. [2 marks]

Answer \_\_\_\_\_  $\mu\text{g}$

10



**BLANK PAGE**

**[Turn over]**



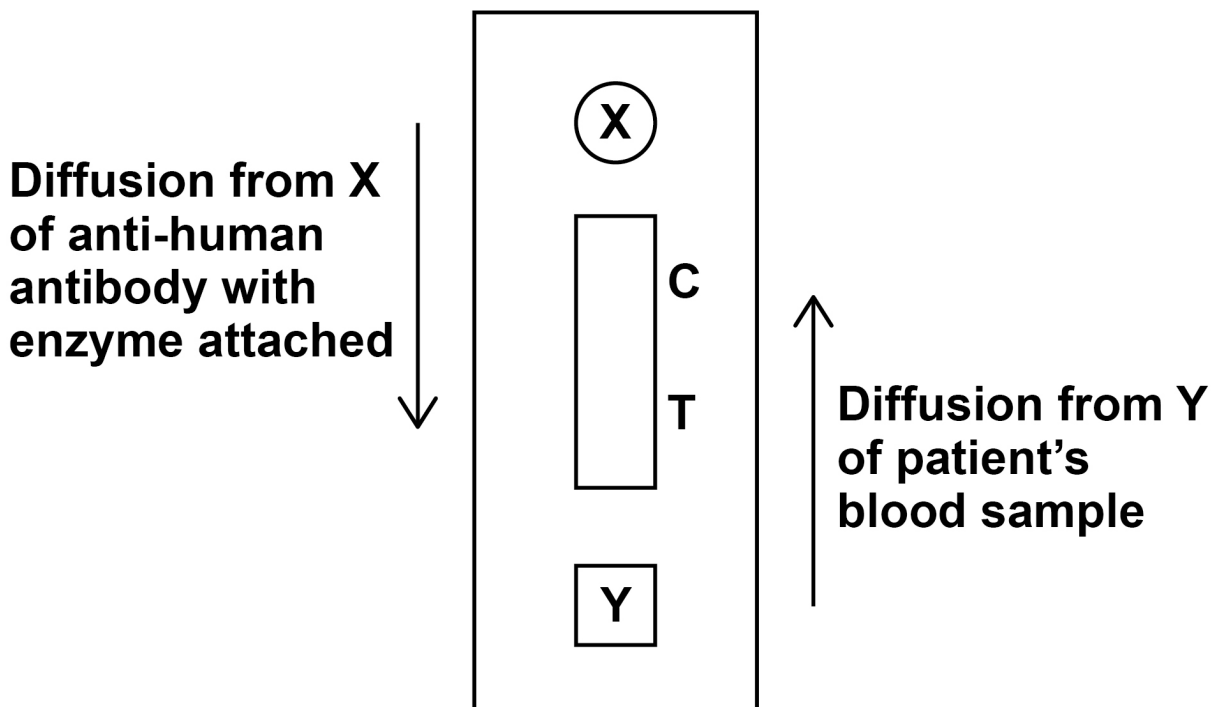
09

Dengue fever is a human disease caused by the dengue virus.

Scientists designed an ELISA test to detect antibodies to the dengue virus in a patient's blood sample.

FIGURE 10 shows a diagram of this test and some information about how it works.

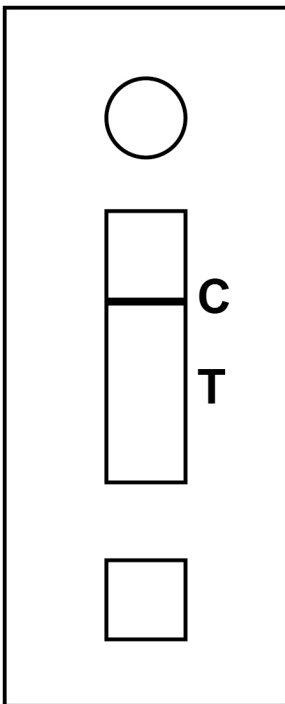
FIGURE 10



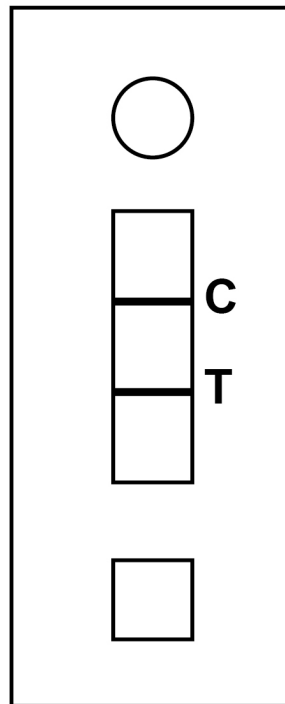
**FIGURE 11** shows the negative and positive results that were produced 20 minutes after the use of the test shown in FIGURE 10.

**FIGURE 11**

**Negative**



**Positive**



**[Turn over]**





09.2

A line at C shows that the test has worked.

Suggest ONE reason why a line at C shows the test has worked. [1 mark]

---

---

---

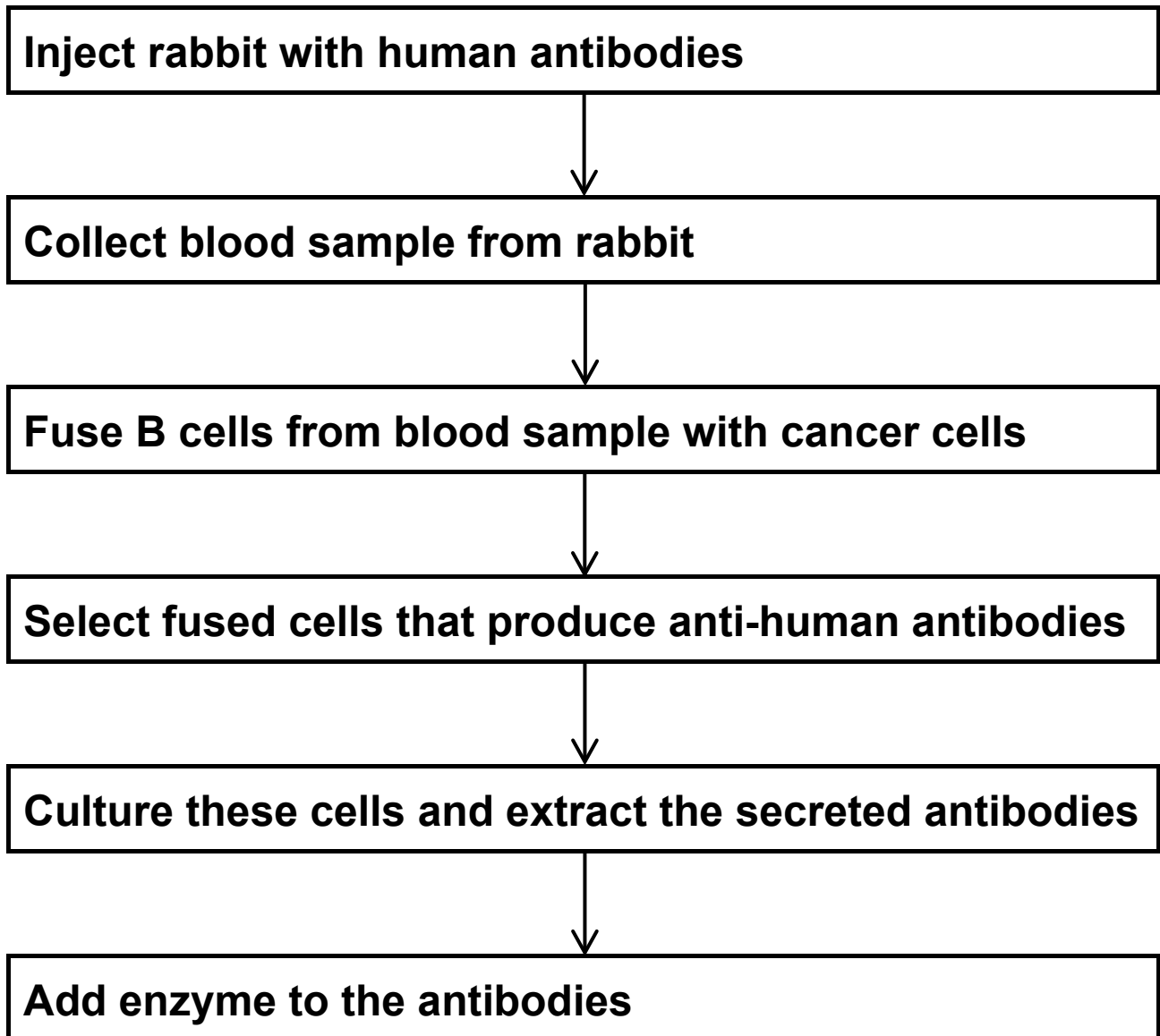
---

[Turn over]



**FIGURE 12** shows a flowchart of how the anti-human antibodies with enzyme attached are produced.

**FIGURE 12**



**09.3**

**Suggest why the fused cells allow continuous production of monoclonal antibodies. [2 marks]**

---

---

---

---

---

---

---

---

---

---

---

**09.4**

**Evaluate the ethics of the production process shown in FIGURE 12. [1 mark]**

---

---

---

**[Turn over]**





**Early identification of dengue fever can be difficult as many other diseases produce the same symptoms. Early identification is important because people suffering with dengue fever can become ill very quickly and may need hospital treatment.**

**Scientists compared the effectiveness of three diagnostic tests for dengue fever.**

- Laboratory-based test – a patient’s blood sample is sent from the doctor’s clinic to a laboratory for testing.**
- Current test used in the doctor’s clinic.**
- New test to be used in the doctor’s clinic – the ELISA test shown in FIGURES 10 and 11 (on pages 58 and 59).**

**The scientists’ results are shown in TABLE 3, on the opposite page.**

**A blood sample from each patient with confirmed dengue fever at each time after onset of symptoms was tested with all three diagnostic tests.**



**TABLE 3**

<b>Time after onset of symptoms / days</b>	<b>Number of confirmed dengue fever patients tested</b>	<b>Number of positive results</b>		
		<b>Laboratory-based test</b>	<b>Current test</b>	<b>New test</b>
<b>1-2</b>	<b>14</b>	<b>10</b>	<b>0</b>	<b>6</b>
<b>3-4</b>	<b>38</b>	<b>28</b>	<b>6</b>	<b>24</b>
<b>5-7</b>	<b>18</b>	<b>8</b>	<b>14</b>	<b>14</b>

**[Turn over]**



09.5

The scientists recommend that the new test is used for the identification of dengue fever in all countries around the world.

Discuss this recommendation. Use all the information given. [3 marks]

---

---

---

---

---

---

---

---

---

---

---

---

---

**[Turn over]**





09.6

The dengue virus causes damage to capillaries so that blood proteins move out of the capillaries into the tissue fluid.

Explain how this would affect the return of tissue fluid into the capillaries.  
[2 marks]

---

---

---

---

---

---

---

11

**[Turn over]**







---

---

---

---

---

















**BLANK PAGE**

For Examiner's Use	
Question	Mark
1	
2	
3	
4	
5	
6	
7	
8	
9	
10	
<b>TOTAL</b>	

**Copyright information**

For confidentiality purposes, all acknowledgements of third-party copyright material are published in a separate booklet. This booklet is published after each live examination series and is available for free download from [www.aqa.org.uk](http://www.aqa.org.uk).

Permission to reproduce all copyright material has been applied for. In some cases, efforts to contact copyright-holders may have been unsuccessful and AQA will be happy to rectify any omissions of acknowledgements. If you have any queries please contact the Copyright Team.

Copyright © 2023 AQA and its licensors. All rights reserved.

**WP/M/MW/Jun23/7402/1/E6**