



**GCSE**

**3100UM0-1**

**FRIDAY, 16 JUNE 2023 – AFTERNOON**

**HISTORY**

**Unit 3: Thematic Study**

**3D. Changes in Patterns of Migration,**

**c.1500 to the Present Day**

**1 hour 15 minutes plus your additional time allowance**

**Surname** \_\_\_\_\_

**First name(s)** \_\_\_\_\_

**Centre Number** \_\_\_\_\_

**Candidate Number** 0 \_\_\_\_\_

**For Examiner's use only**

<b>Question</b>	<b>Maximum Mark</b>	<b>Mark Awarded</b>
<b>1.</b>	<b>4</b>	
<b>2.</b>	<b>4</b>	
<b>3.</b>	<b>6</b>	
<b>4.</b>	<b>6</b>	
<b>5.</b>	<b>12</b>	
<b>6.</b>	<b>12</b>	
<b>7.</b>	<b>16</b>	
<b>SPaG</b>	<b>4</b>	
<b>Total</b>	<b>64</b>	

## **INSTRUCTIONS TO CANDIDATES**

**Use black ink, black ball-point pen or your usual method.**

**Write your name, centre number and candidate number in the spaces provided on the front cover.**

**Answer ALL questions.**

**Write your answers in the spaces provided in this booklet. If you run out of space, use the additional page(s) at the back of this booklet, taking care to number the question(s) correctly.**

## **INFORMATION FOR CANDIDATES**

**The number of marks is given in brackets at the end of each question.**

**Question 7 will assess your ability to construct a balanced, reasoned and well-substantiated extended response.**

**In addition, your answer to question 7 will assess your ability to spell, punctuate and use grammar accurately and use a wide range of specialist language as appropriate.**

**(Turn over)**

Answer ALL questions.

**QUESTION 1**

Complete the sentences below with an accurate term.

[4 marks]

(a) In the sixteenth and seventeenth centuries many sailors came as immigrants to Britain from

\_\_\_\_\_ .

(b) The industrial revolution led to many people moving from rural areas to

\_\_\_\_\_ .

(c) In the late nineteenth and early twentieth centuries, many Italians migrated to Britain and established

\_\_\_\_\_ .

(d) In the second half of the twentieth century British people who emigrated to Australia were known as £10

\_\_\_\_\_ .

4

(Turn over)

**SOURCE A**

**[Belgian refugees arriving in Rhyll in 1914. The group includes men, women and children and they are riding in a large open-top vehicle. There is a banner on the front of the vehicle which states “Welcome”. People are lining the street to watch their arrival.]**

**SOURCE B**

**[An anti-immigration march in London in 1972. A crowd of white people are marching along a street, behind a banner which states “Britain for the British”. Some are holding British flags, and others are holding posters which state “Stop Immigration. Enoch is right”.]**

## SOURCE C



[A march in support of immigrants in London in 2016. A large crowd of mainly white men and women can be seen in a street. They are carrying posters which state “No-one is illegal: Migrant workers welcome here” and “Migrants and refugees welcome here”.]

(Turn over)









---

---

---

---

---

---

---

6

(Turn over)





---

---

---

---

---

---

---

6

(Turn over)









---

---

---

---

---

---

---

---

---

---

$\frac{2}{10}$	Total
	<input type="text"/>

(Turn over)









---

---

---

---

---

---

---

---

---

---

---

---

2	Total <input type="text"/>
10	

(Turn over)

**QUESTION 7**

**This question is about the impact of emigration.**

**To what extent have emigrants from Britain, over time, had a positive impact on the countries in which they settled? [16 marks]**

**In your answer you should:**

- **show how the impact of emigrants from Britain has been positive over three historical eras**
- **discuss the ways in which the impact of emigrants has been less favourable over three historical eras**
- **include direct references to the history of Wales.**

**Marks for spelling, punctuation and the accurate use of grammar and specialist language are allocated to this question. [4 marks]**

---

---

---

---

**(Turn over)**













---

---

---

---

---

---

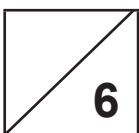



---

---

---

---

**END OF PAPER**

	<b>Total</b>	<b>SPaG</b>
		

**(Turn over)**







