



**GCSE**

**3100UK0-1**

**TUESDAY, 11 JUNE 2024 – AFTERNOON**

**HISTORY**

**Unit 3: Thematic Study**

**3B. Changes in Health and Medicine,  
c.1340 to the Present Day**

**1 hour 15 minutes plus your additional time allowance**

**Surname** \_\_\_\_\_

**First name(s)** \_\_\_\_\_

**Centre Number** \_\_\_\_\_

**Candidate Number** 0 \_\_\_\_\_

**For Examiner's use only**

<b>Question</b>	<b>Maximum Mark</b>	<b>Mark Awarded</b>
<b>1.</b>	<b>4</b>	
<b>2.</b>	<b>4</b>	
<b>3.</b>	<b>6</b>	
<b>4.</b>	<b>6</b>	
<b>5.</b>	<b>12</b>	
<b>6.</b>	<b>12</b>	
<b>7.</b>	<b>16</b>	
<b>SPaG</b>	<b>4</b>	
<b>Total</b>	<b>64</b>	

**INSTRUCTIONS TO CANDIDATES**

**Use black ink, black ball-point pen or your usual method.**

**Write your name, centre number and candidate number in the spaces on the front cover.**

**Answer ALL questions.**

**Write your answers in the spaces provided in this booklet. Additional space is provided for Question 7 within the booklet (if required). If further space is required for any question, use the additional page(s) at the back of this booklet, taking care to number the question(s) correctly.**

**INFORMATION FOR CANDIDATES**

The number of marks is given in brackets at the end of each question.

**Question 7** will assess your ability to construct a balanced, reasoned and well-substantiated extended response.

In addition, your answer to **Question 7** will assess your ability to spell, punctuate and use grammar accurately and use a wide range of specialist language as appropriate.

Answer ALL questions.

## QUESTION 1

COMPLETE THE SENTENCES BELOW WITH AN ACCURATE TERM. [4 marks]

- (a) In the Middle Ages, doctors believed that the body was made up of four fluids which they called the four \_\_\_\_\_ .
- (b) In the seventeenth century, William Harvey proved that the heart was responsible for the circulation of \_\_\_\_\_ .
- (c) The first antibiotic, discovered in 1928 by Alexander Fleming, is called \_\_\_\_\_ .

(Turn over)

1 (d) The Labour politician who was responsible for introducing the National Health Service in

1948 was called \_\_\_\_\_ .

4

(Turn over)

## QUESTION 2

### SOURCE A



[A monastic hospital in the medieval period. Nuns are shown providing food and drink to the sick in a hospital, which looks like the inside of a church building. There is an altar with a crucifix, as well as statues and areas for prayer. A priest is talking to one patient. The very sick have been separated from those who are getting better. Two nuns are sewing the dead into burial sheets.]

## SOURCE B



**[A hospital ward in the late nineteenth century. Male patients can be seen lying in a long line of beds, covered in white sheets, which are on both sides of a large room. There is nothing around each bed, except for one small unit. There is a large central table. Female nurses wearing a uniform with white aprons and caps are standing in the ward.]**

## SOURCE C



**[A hospital ward in the early twenty-first century. The photograph shows two beds, which are on wheels and are raised at the one end. Curtains can be seen, which can be pulled around each bed. Electrical equipment is plugged into sockets behind the beds. A male and a female nurse are talking to a male patient. They are wearing a uniform of matching coloured tunics and trousers. A male and a female doctor are talking to the other female patient. They have paperwork in their hands as they talk to the patient.]**









---

---

---

---

---

---

---

6

(Turn over)





---

---

---

---

---

---

---

---

6

(Turn over)









---

---

---

---

---

---

---

---

---

---

2
10

Total

--

(Turn over)











## QUESTION 7

**THIS QUESTION IS ABOUT ATTEMPTS TO PREVENT ILLNESS AND DISEASE.**

**To what extent have attempts to prevent illness and disease consistently improved over time? [16 marks]**

**In your answer you should:**

- **show how attempts to prevent illness and disease have improved over three historical eras**
- **discuss the variations in the extent of improvement over three historical eras**
- **include direct references to the history of Wales.**

**Marks for spelling, punctuation and the accurate use of grammar and specialist language are allocated to this question. [4 marks]**

---

---

---

---

---

---

---

---

**(Turn over)**













---

---

---

---

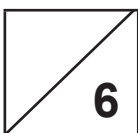



---

---

---

---

**END OF PAPER**

	<b>Total</b>	<b>SPaG</b>
		

**(Turn over)**







